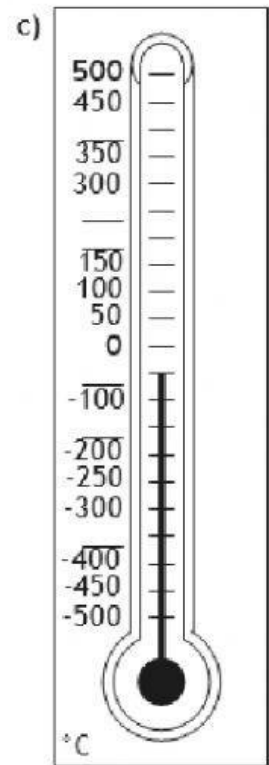
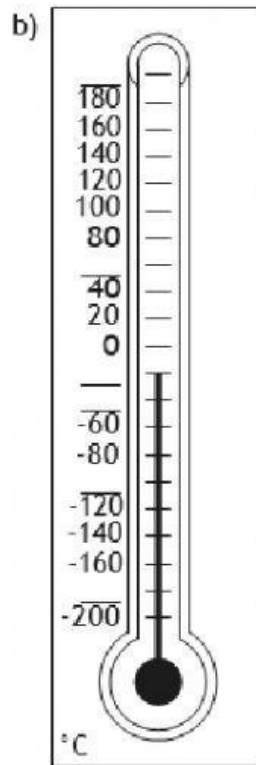
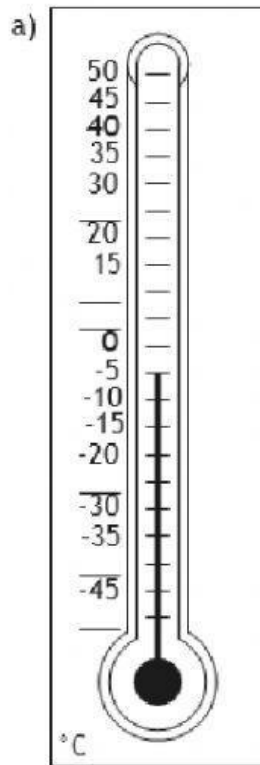


Topic: Negative Numbers

To count backwards through zero in the context of temperature.

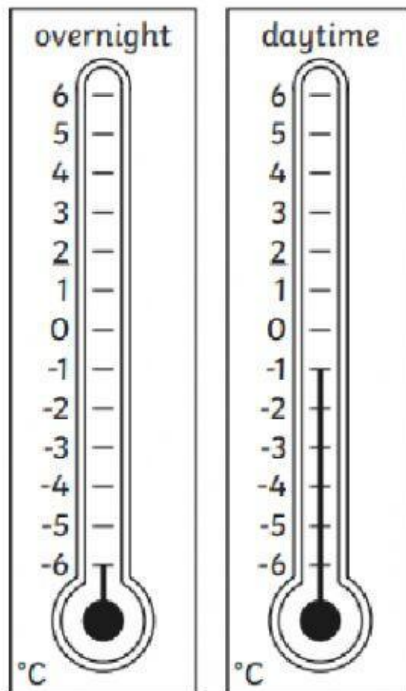
- 1) Some numbers are missing from these thermometers. Can you label them correctly?



Hot or cold? Write the correct temperature.

- a) Which is hotter: -125°C or 150°C ?
- b) Which is colder: -515°C or -6°C ?
- c) Which is hotter: 95°C or 0°C ?
- d) Which is hotter: -12°C or -2°C ?
- e) Which is colder: 0°C or -12°C ?

On Friday, the temperature was -6°C overnight and -1°C in the daytime. How many degrees Celsius warmer was it in the daytime?



Yesterday, the lowest temperature was -5°C . Today's lowest temperature is 3°C colder. What is today's lowest temperature?

