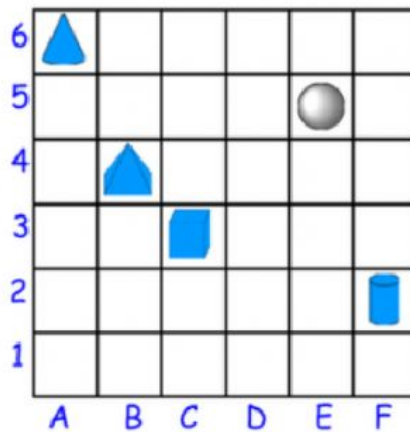
	2nd SEMESTER FINAL EXAM PAPER ACADEMIC YEAR 2020/2021	
	Subject : Math	Name :
	Primary : 3	Day/ Date :

I. Circle the correct answer!

1. Make a half turn clockwise from the letter



Look at the grid below to answer number 2 until number 4



2. What kind of shape that you find on position C,3?

a. Pyramid

b. Cylinder

c. Cube

3. At what position you can find cone?

a. A,6






b. E,5

c. F,2

4. What kind of shape that you can find on position B,4?
- a. Pyramid b. Cube c. Sphere

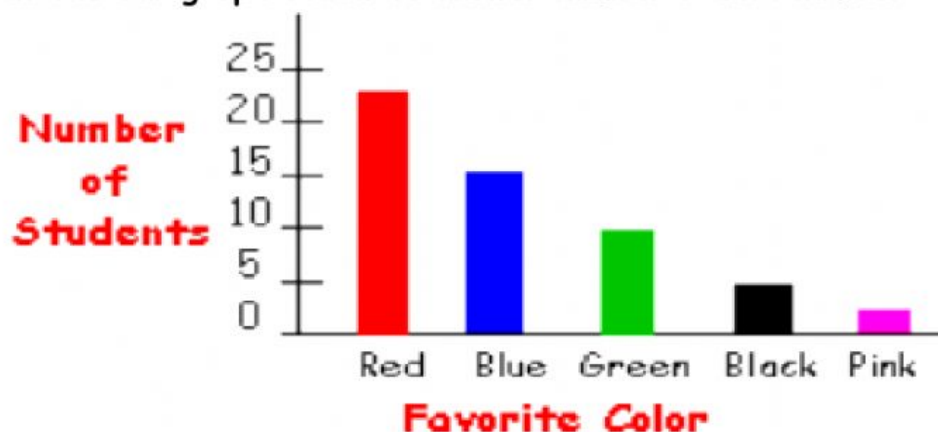
Look at the table bellows to answer number 5 until number 6.

The table show favorite fruit of some students.

Fruit	Tally	Total
Apple 		12
Banana 		6
Orange 		3
Grapes 		9
Pear 		2

5. What fruit does student favorite the most?
- a. Gapes b. Apple c. Banana
6. What is the difference between the number of Banana and Orange?
- a. 3 b. 9 c. 5

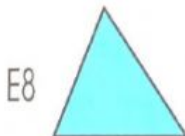
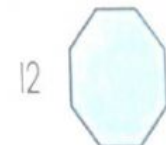
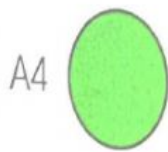
Look at the bar graph bellow to answer number 7 until number 10



7. What is the favorite color student the most?
 a. Blue b. Red c. Green
8. How many students like green color?
 a. 15 students b. 10 Students c. 5 students
9. What is the difference between the number of student who like blue color and the student that like black color?
 a. 10 students b. 5 Students c. 15 Students
10. What is least favorite color?
 a. Green b. black c. pink

II. Fill in the blank!

1. Draw the shapes in the correct square on the grid



10										
9										
8										
7										
6										
5										
4										
3										
2										
1										
	A	B	C	D	E	F	G	H	I	J

2. Ayu loves to collect seashells.

Type 1		         
Type 2		     
Type 3		      

Key:  represents 1 seashell

a. How many type 1 Seashells does Ayu has?

b. How many seashells in type 2 does Ayu has?

c. How many seashells are she has altogether?