

ST. HUGH'S PREPARATORY SCHOOL
SUMMER TERM EXAMINATION 2021
READING AND COMPRHENSION

Name: _____ **Date:** _____

Grade: _____ **Teachers:** Miss Taylor and Miss Mitchell

Read the sentences and choose the answer that best describes what is happening.

1. Your mom takes your temperature. You must stay home in bed all day. You eat soup and take medicine. What is happening?

- a) I just want to take a day from school.
- b) I am sick.

2. Tim and Jim jump into the water. It is cold! Dan goes down the slide. 'Neal. I like to play in your pool!' Dennis says.

- a) The boys are swimming at Neal's house.
- b) Neal and his friends cannot swim well.

3. Look at each set of pictures and try to figure out what happened.



- a) The girl bought a chocolate cake.
- b) The girl baked a chocolate cake.
- c) The girl cooked dinner.

Read the stories and answer the following questions.

Doggy the Dog	Catty the Cat
Hi, my name is Doggy. I am a dog. I bark, chase cats, and like to play and sleep. I have fur. I need to be given a bath to get clean. The name of my owner is Jane, and she loves me very much. We play all day long.	I am Catty the cat. I have fur, I meow, and chase mice. I like to sleep, and I can lick myself to get clean. I have an owner, and her name is Bell. Bell takes me for walks and plays with me at night when she is free.

4. How are Catty and Doggy alike?

- a) They both like to play.
- b) They both have fur.
- c) They both like cats.

5. Write two ways to tell how Catty and Doggy are different?

a)

b)

Read the fable and answer the following questions.



The Lion and the Mouse
by Aesop

A Lion lay asleep in the tall grass, when a tiny gray Mouse came through the grass and accidentally bumped into the Lion's nose. The Lion, angry to be woken from his nap, placed his huge paw on the Mouse to eat her.

"Don't eat me!" begged the Mouse. "Please let me go and some day I will repay you."

The Lion did not think that a little Mouse could ever help a huge Lion, but he laughed at the idea and let the Mouse go.

A few days later, the Lion was caught in the ropes of a hunter's net.

Unable to free himself, he began to roar angrily. The Mouse followed the voice and found the Lion stuck in the net. She grabbed one of the big ropes around him, and chewed it until it broke. The Lion was free!

6. Who are the characters in the story?

7. How did Lion's action affect Mouse?

8. What happened at the beginning of the story?

- a) The Mouse begged the Lion not to eat him.
- b) Lion was sleeping.
- c) Mouse set Lion free.

9. What happened in the middle of the story?

- a) A hunter catches Lion in a net.
- b) The Lion woke up and was very angry.
- c) Lion was set free.

10. What happened at the end of the story?

- a) Mouse bites the net and sets Lion free.
- b) Mouse begged Lion not to eat him.
- c) Lion was asleep and Mouse accidentally woke him up.

11. What is the moral of the story?

Read the calendar and answer the questions below.

May 2021

Sunday	Monday	Tuesday	Wednesday	Thursday	Friday	Saturday
						1
2	3	4	5	6	7	8
9	10	11	12	13	14	15
16	17	18	19	20	21	22
23	24	25	26	27	28	29
30	31					

12. What is the year of the calendar?

- a) 2021
- b) 2020
- c) 2012

13. Which day of the week is the first day of the month?

14. How many days are in the month of May?

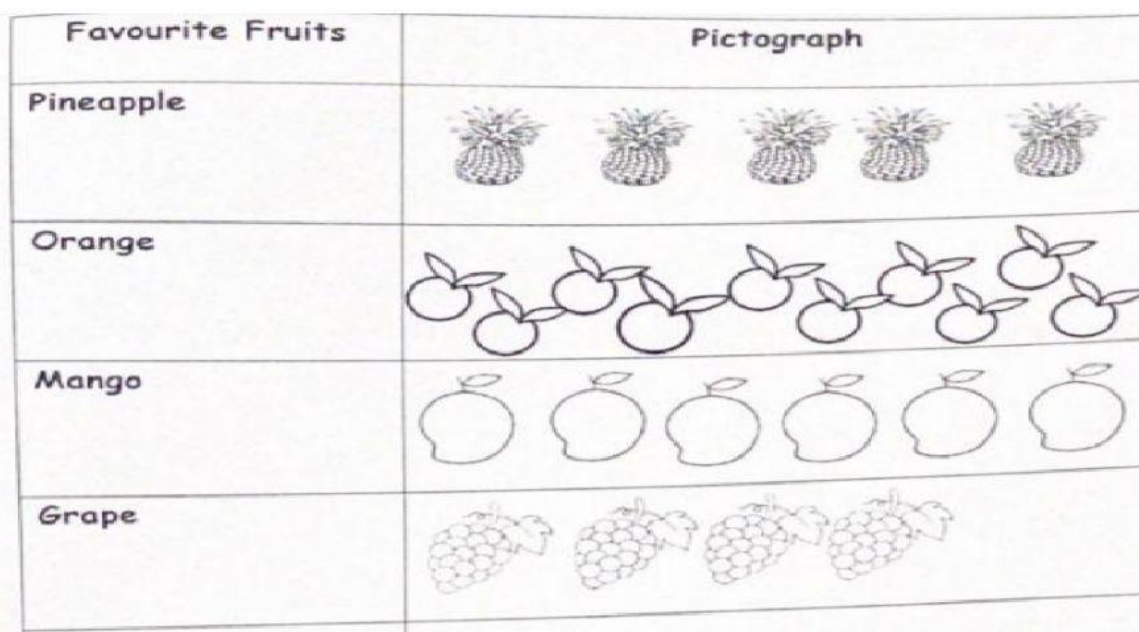
- a) 4
- b) 10
- c) 31

15. What is the date of the last day of the month?

- a) Saturday, May 15, 2021
- b) Monday, May 31, 2021
- c) Sunday, May 23, 2021

Pictograph – Our Favourite Fruits

Use the pictograph to answer the following questions.



16. How many persons in all have a favourite fruit?

_____.

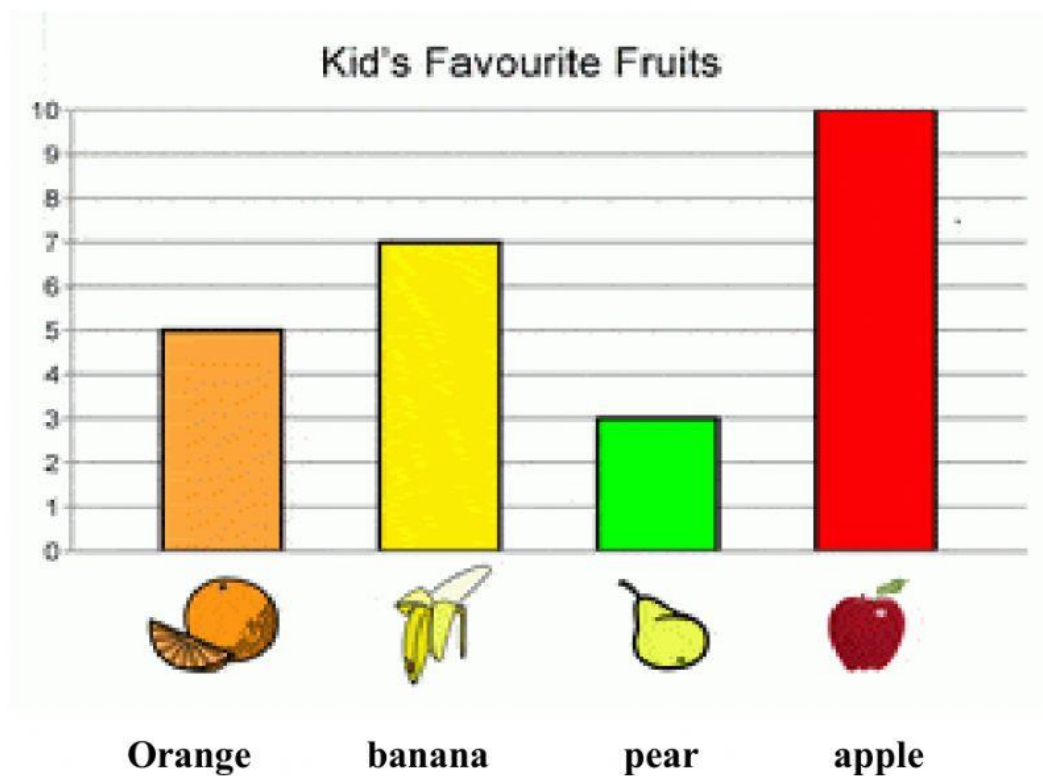
17. How many more people like oranges than pineapples?

_____.

18. Which fruit is the least popular?

_____.

Read the bar graph, then answer the following questions.



19. How many children like orange?

- a) 7
- b) 5
- c) 10









20. There are _____ fewer children who like oranges than bananas.

- a) 2
- b) 4
- c) 6

21. How many more children like bananas than pears?

Read the tally chart, then answer the following questions.

The tally chart shows the number of animals in a zoo.

Animals	Tally Marks
 Tiger	
 Giraffe	
 Elephant	
 Deer	

22. How many tigers are in the zoo?

_____.

23. Which two zoo animals have the same number?

_____.

24. There are _____ fewer giraffes than deer.

- a) 4
- b) 5
- c) 8