

Name.....

Date.....


## Addition with money

£1.00= 100p

Grocery shopping list:

1. Banana	50p	4. Pack of Tomatoes	90p
2. Apple	40 p	5. Pineapple	£1.20p
3. Carrot	30p	6. Strawberries	£1.00
7. Box of Peaches	£2.10		

1.




Total price = \_\_\_\_\_

2.



Total price = \_\_\_\_\_

3.



Total price = \_\_\_\_\_

4.




Total price = \_\_\_\_\_

5.



Total price = \_\_\_\_\_

6.



Total price = \_\_\_\_\_