
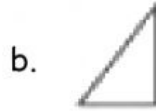


|   |   |             |
|---|---|-------------|
|  | <b>2<sup>nd</sup> SEMESTER FINAL EXAM PAPER</b><br><b>ACADEMIC YEAR 2020/2021</b> |             |
|   | Subject : Math  | Name :      |
|   | Primary : 1   | Day/ Date : |

I. Circle the correct answer !

1. Halves of this this shapes is ...



2. Which one is the heaviest?



3. What time is it?

a. 10.00

b. 09.00

c. 11.00



4. Which one is the correct statement according the picture?

a. The junk food is heavier than the fruit

b. The fruit is heavier than the junk food

c. The fruit is as heavy as the fruit



5. The day after Wednesday is ...  
a. Thursday                      b. Tuesday                      c. Friday

6. What is the 3<sup>rd</sup> month?  
a. January                      b. March                      c. May

7. Which one is the odd number?  
a. 23                      b. 44                      c. 30

8. The Value of this note is ...  
a. One Dollar                      b. One cent                      c. One Rupiah




9. Half of the Oranges are ...  
a. 2 oranges  
b. 3 oranges  
c. 4 oranges



10. Today is Monday, yesterday was ...  
a. Sunday                      b. Wednesday                      c. Tuesday

II. Match them





HOT



COLD





**III. Find the answer**

1. Circle the group of even number

|    |    |    |    |    |
|----|----|----|----|----|
| 11 | 16 | 18 | 19 | 15 |
| 12 | 13 | 20 | 21 | 14 |
| 17 | 22 | 23 | 34 | 21 |

2. Circle the group of odd number

|    |    |    |    |    |
|----|----|----|----|----|
| 51 | 60 | 72 | 83 | 77 |
| 42 | 85 | 90 | 44 | 65 |
| 79 | 96 | 48 | 57 | 48 |

3. Cindy and her Dad jog from 7 o'clock to 10 o'clock. How long do they jog?

|  |
|--|
|  |
|--|

4. Ria had piano class at 9 o'clock. The class finished at 11 o'clock. How long was the piano class?

5. Write the halves of each number in the empty circle.

