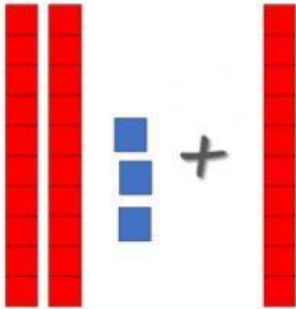
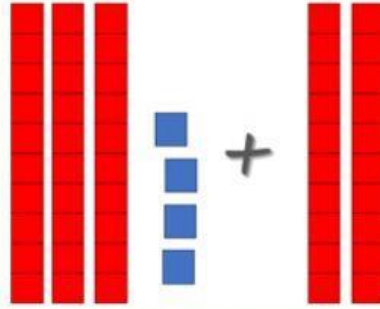


RESOLVÉ LAS SUMAS:

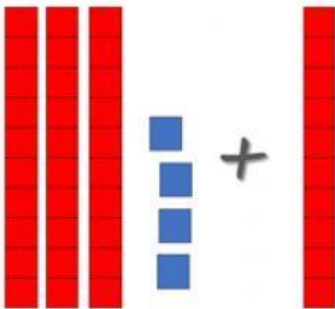
$23 + 10 =$



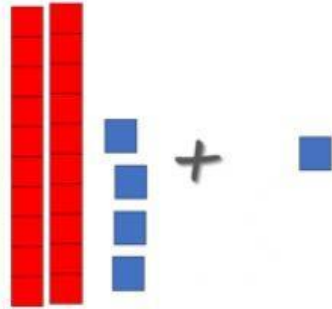
$34 + 20 =$



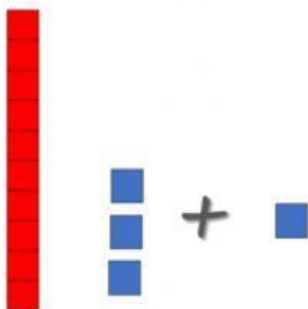
$34 + 10 =$



$24 + 1 =$



$13 + 1 =$



$19 + 1 =$

