



Họ và tên: _____











Lớp: _____ Ngày: ____ / ____

Phiếu số 1- Practice Addition/ Subtraction within 100 no regrouping

1. Cut the hat then glue.



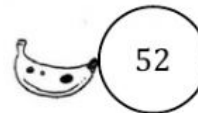
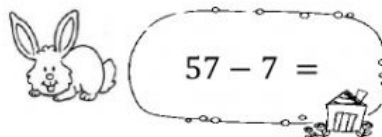
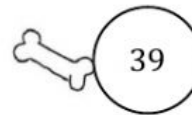
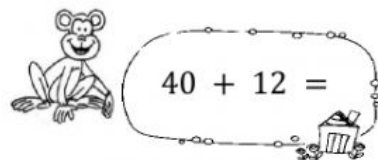
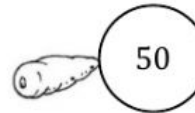
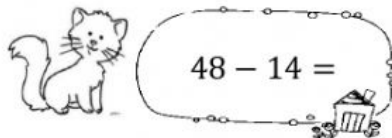
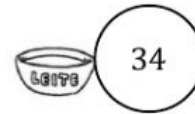
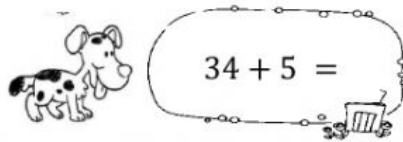
$\begin{array}{r} 54 \\ +41 \\ \hline \end{array}$	$\begin{array}{r} 83 \\ -10 \\ \hline \end{array}$	$\begin{array}{r} 26 \\ +62 \\ \hline \end{array}$	$\begin{array}{r} 94 \\ -64 \\ \hline \end{array}$	$\begin{array}{r} 75 \\ +24 \\ \hline \end{array}$
$\begin{array}{r} 37 \\ -11 \\ \hline \end{array}$	$\begin{array}{r} 44 \\ +23 \\ \hline \end{array}$	$\begin{array}{r} 64 \\ -32 \\ \hline \end{array}$	$\begin{array}{r} 33 \\ +51 \\ \hline \end{array}$	$\begin{array}{r} 86 \\ -25 \\ \hline \end{array}$





2. Match.



3. Choose the correct answer.

Rosa has 45 balloons.

She has 23 more balloons.

How many balloons does she have in all?

☐ 22

☐ 86

☐ 68



	Tens	Ones
<input type="checkbox"/>		

4. Choose the missing numbers.

