



Họ và tên: \_\_\_\_\_

Lớp: \_\_\_\_\_ Ngày: \_\_\_\_ / \_\_\_\_

**Phiếu số 2 - Practice Addition/ Subtraction within 100 no regrouping***Find the sum, difference.*

1.  $26 + 11 = \underline{\hspace{2cm}}$

Tens	Ones

+

2.  $52 + 7 = \underline{\hspace{2cm}}$

Tens	Ones

+

3.  $64 - 32 = \underline{\hspace{2cm}}$

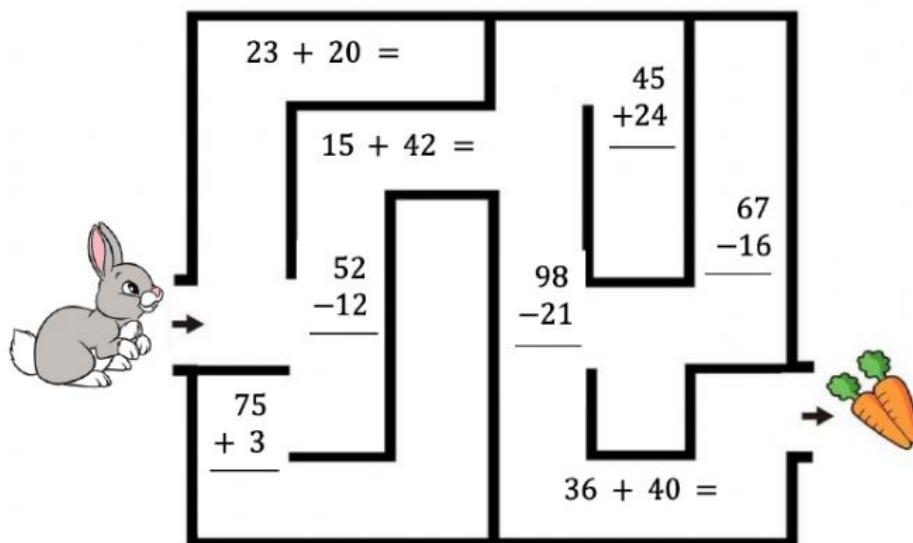
Tens	Ones

-

4.  $87 - 5 = \underline{\hspace{2cm}}$


Tens	Ones


-


5. *Add, or subtract to help the rabbit take carrots.*




6. Choose  $>$ ,  $<$ ,  $=$ .


$$34 + 12 \quad \square \quad 46$$


$$57 - 31 \quad \square \quad 20$$


$$23 + 5 \quad \square \quad 39 - 7$$



7. Write the number sentence.

John has 29 pokemon cards.

He takes away 8 pokemon cards.

How many pokemon cards does he have left?

$$\underline{\quad} \bigcirc \underline{\quad} = \underline{\quad}$$



	Tens	Ones
<input type="text"/>		

He have \_\_\_\_\_ pokemon cards left.