

# ATIVIDADE AVALIATIVA DE MATEMÁTICA

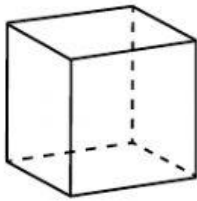
NOME:

DATA:

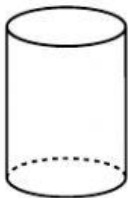
PROFESSORA ADRIANA LOPES - 1º ANO - TURMA 102

1

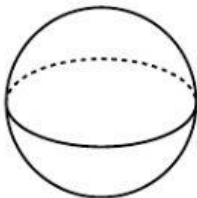
LIGUE A IMAGEM AO SEU NOME.



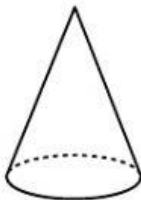
CONE




ESFÉRA



CUBO



CILINDRO




BLOCO  
RETÂNGULAR

2

ESCREVA COMO SE LÊ OS NÚMEROS ABAIXO. DEPOIS LIGUE OS NÚMEROS NAS QUANTIDADES REPRESENTADAS AO LADO.


12



15



18




10




11

19



14



3

ESCREVA QUANTOS REAIS CADA CRIANÇA TEM.

**PAULA**




REAIS

**LETÍCIA**




REAIS

**JOÃO**




REAIS

**BRUNO**




REAIS

4

VEJA O PREÇO DE CADA PRODUTO. ARRASTE E COLE OS VALORES REPRESENTADOS PELO DINHEIRO.



**R\$ 4,00**



**R\$ 11,00**



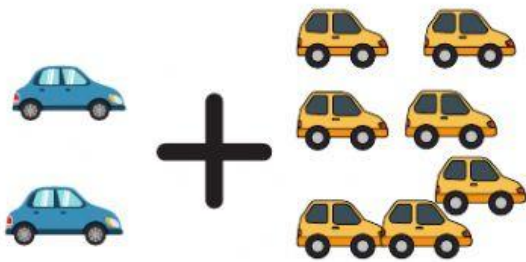
**R\$ 10,00**





5

RESOLVA AS ADIÇÕES.



$$2 + 6 = \boxed{\phantom{00}}$$




$$6 + 4 = \boxed{\phantom{00}}$$




$$8 + 3 = \boxed{\phantom{00}}$$



$$5 + 1 = \boxed{\phantom{00}}$$



$$7 + 2 = \boxed{\phantom{00}}$$



$$4 + 4 = \boxed{\phantom{00}}$$

**AMO VOCÊS!**