












Let's Practise

1 Write the total amount in dollars and in cents.

(a)

 50 cents	 25 cents	 10 cents	 10 cents	\$ 	 c
--	--	--	--	--	---

(b)

 5 FIVE DOLLARS	 1 ONE DOLLAR	\$ 	 c
 10 cents	 10 cents		
 1 cent			

2 What is the amount in cents?

(a) \$7 = \text{ } c

(b) \$4.05 = \text{c}

3 What is the amount in dollars?

(a) $65c = \$$

(b) $340c = \$$

Worksheet 2, pages 220–223