


Choose the right answer.

Which one is longer?

☐☐

Which one is shorter?

☐☐



Which one is shorter?

☐☐

Which one is longer?

☐☐

Which one is longer?

☐☐

Which one is shorter?

☐☐