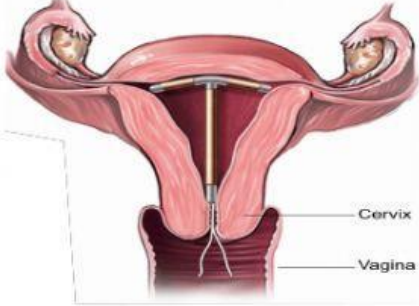
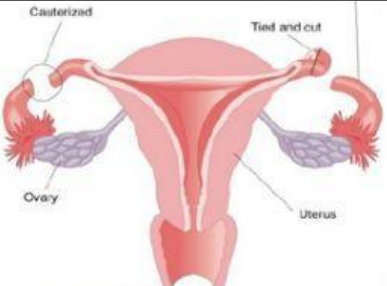




## Exercise 4.6 INFERTILITY AND CONTRACEPTION

### 1. CHOOSE THE CORRECT CONTRACEPTION METHOD FOR EACH OF THE FOLLOWING CATEGORIES

a) Stopping the formation of mature ovum (ovulation)	
b) Prevent sperms from fertilising the ovum	
c) Stopping the implantation of embryo	

### 2. DRAW AND DROP THE CORRECT TYPES OF CONTRACEPTIVE METHODS FOR THE FOLLOWING DIAGRAMS

SPERMICIDE

IUCD

LIGATION

VASECTOMY

CONDOM

### 3. UNDERLINE THE CORRECT ANSWER.

- Infertility is the(ability / inability) to produce children or offspring.
- An impotent man is (able / unable) to ejaculate (sperms / ovum ) into the vagina of his partner.
- ( Drug or hormone treatment / Surgery / In Vitro Fertilization) helps to stimulate the testes and ovaries to produce gametes.
- Contraception allows (married / unmarried ) couples to plan and control the size of their family

