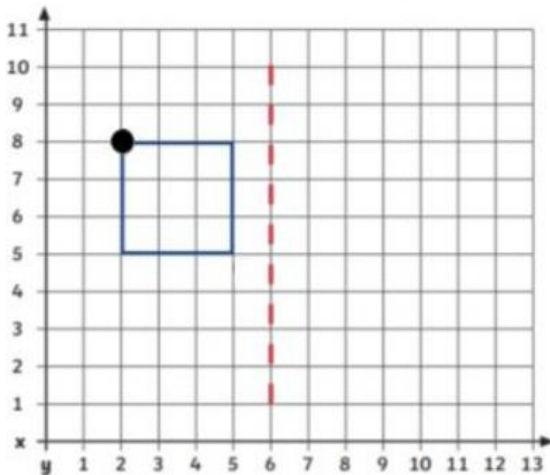


Coordinates: Reflecting Shapes in the First Quadrant

Reflect the shape over the mirror line.

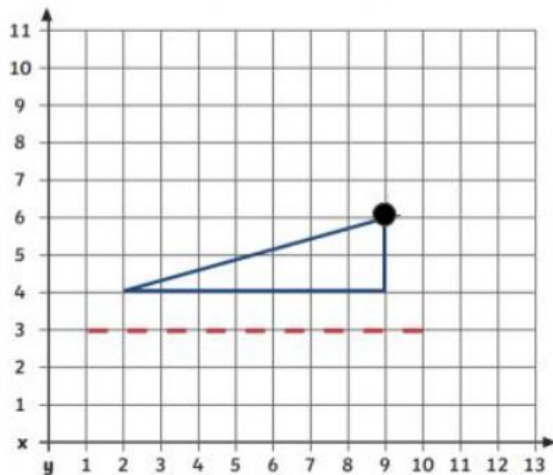
Write the new coordinates in clockwise order starting from the corner with the dot.



Write the coordinates for the reflected shape.

Start at the dotted coordinate and then give the rest in clockwise order.

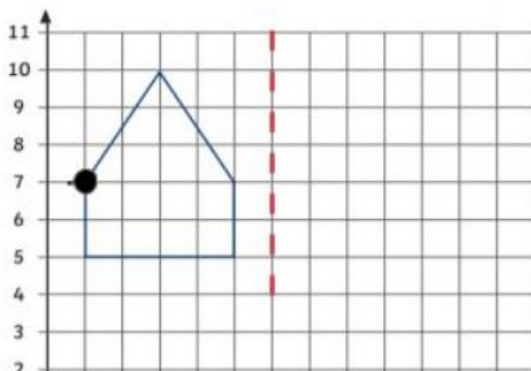
(,) (,) (,) (,)



Write the coordinates for the reflected shape.

Start at the dotted coordinate and then give the rest in clockwise order.

(,) (,) (,)



Write the coordinates for the reflected shape.

Start at the dotted coordinate and then give the rest in clockwise order.

(,) (,) (,) (,) (,)