


# Number bond sticks Subtraction within 10

Can you complete these subtraction number sentences using number bonds to 10?

Example:




$$10 - 3 = 7$$

Can you write a matching subtraction number sentence below each picture?



$$10 - \square = \square$$



$$10 - \square = \square$$




$$10 - \square = \square$$



$$10 - \square = \square$$



$$10 - \square = \square$$




$$10 - \square = \square$$



$$10 - \square = \square$$




$$10 - \square = \square$$



$$10 - \square = \square$$



$$10 - \square = \square$$



$$10 - \square = \square$$