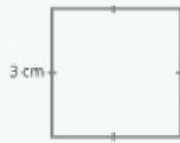


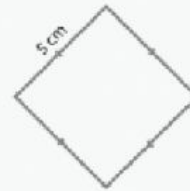
Find the area of the following squares and rectangles.



area: _____



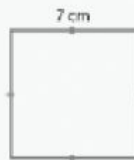
area: _____



area: _____



area: _____



area: _____



area: _____