

Eagle Learning Centre



Name: _____
Class : P1

Subtraction Within 10 Chapter Test Preparation

1. Cross out to subtract
Then circle the answer

a.



$8 - 3 = ?$ 5 6 8

b.



$10 - 4 = ?$ 8 5 6

2. Cross out to subtract
Then complete the subtraction equation.

a.



$9 - 2 = \square$

b.



$6 - 6 = \square$

3. Cross out to subtract
Then fill in the blanks.

a.



$7 - 4 = \square$

b.



$9 - \square = 4$

Eagle Learning Centre

c.



$$7 - \boxed{} = 4$$

4. Fill in the blanks.

a. $5 - 3 = \underline{\hspace{2cm}}$

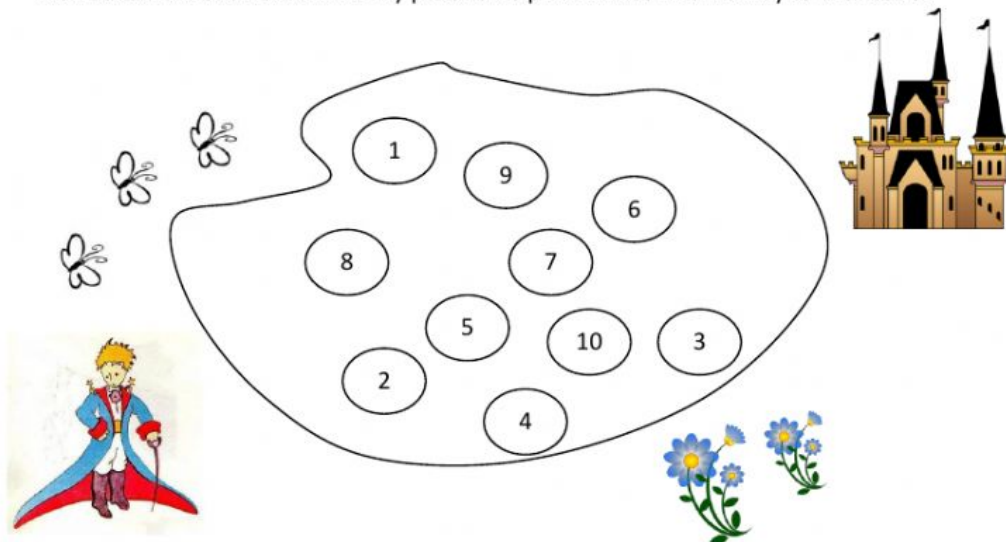
d. $8 - 3 = \underline{\hspace{2cm}}$

b. $9 - 2 = \underline{\hspace{2cm}}$

e. $6 - \underline{\hspace{2cm}} = 3$

5. Fill in the blanks

Then colour the answers on the Lily pads to help the Prince find his way to the castle.



$$\boxed{10} - \boxed{} = \boxed{8} - \boxed{5}$$


$$\boxed{7} - \boxed{} = \boxed{4} - \boxed{3}$$

$$\boxed{9} - \boxed{8} = \boxed{} - \boxed{4}$$


$$\boxed{} - \boxed{0} = \boxed{5} - \boxed{3}$$

Eagle Learning Centre


6. Subtract.
Then match the answer to show where each.



$8 - 8 = \underline{\quad}$



$10 - 2 = \underline{\quad}$



$7 - 2 = \underline{\quad}$

7. Fill in the blanks

1 less than 7 is $\underline{\quad}$

1 less than 5 is $\underline{\quad}$

$\underline{\quad}$ is 1 less than 10

$\underline{\quad}$ is 1 less than 2

8. Making subtraction stories.
Complete the number bonds.

a.

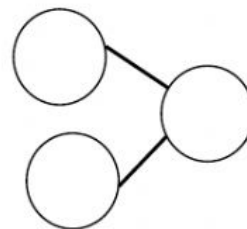


There are $\underline{\quad}$ fruits in a plate

$\underline{\quad}$ fruits are apples.

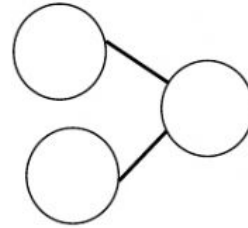


$\square \quad \bigcirc \quad \square = \square$

$\underline{\quad}$ fruits are oranges



Eagle Learning Centre

b.



There are _____ flowers

_____ flowers are sun flowers.



_____ flowers are roses.

9. Complete the subtraction story.
a. How many bananas are left?



_____ bananas are left.

Eagle Learning Centre

b. How many boys are there?



☐ ☐ ☐ ☐

There are _____ boys.

c. How many pears are there?



☐ ☐ ☐ ☐

There are _____ pears.