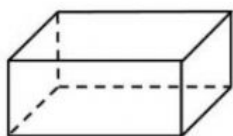


Challenge 16 : What is the difference between a cube and a cuboid?

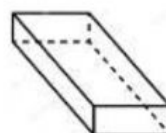
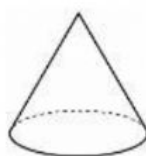
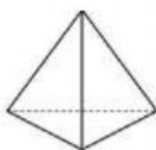
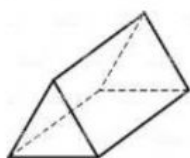
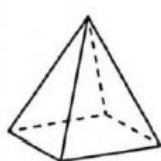


cube



cuboid

Challenge 17 : Match the following shapes.



Triangular-based
pyramid

Cone

Cuboid

Square-based
pyramid

Cylinder

Triangular prism

Challenge 18: Tick the shapes that are prism and name all the shapes

