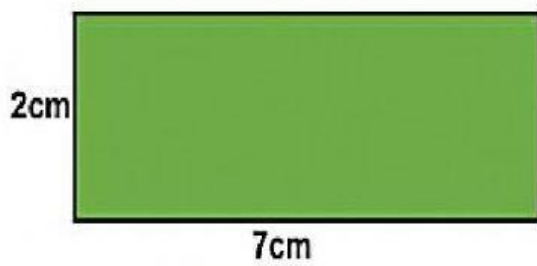
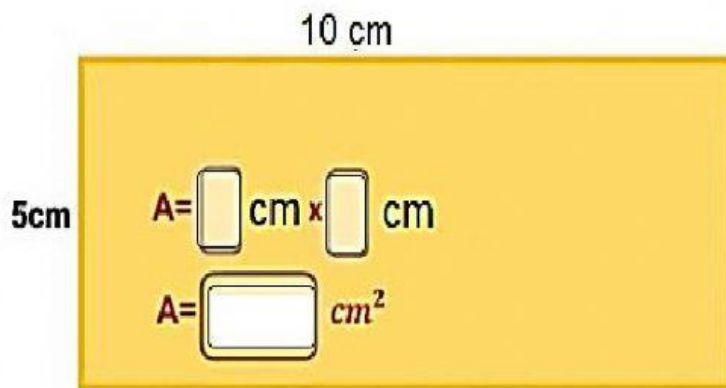


Find the area of each rectangle.

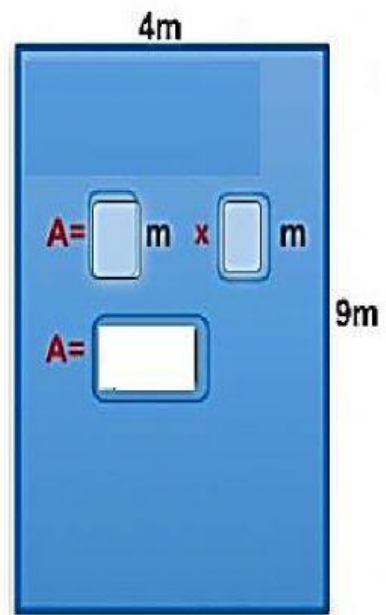


$$A = \boxed{} \times \boxed{}$$



$$A = \boxed{} \text{ cm} \times \boxed{} \text{ cm}$$

$$A = \boxed{} \text{ cm}^2$$



$$A = \boxed{} \text{ m} \times \boxed{} \text{ m}$$

$$A = \boxed{} \text{ m}^2$$