


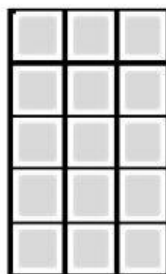
Calculating Area by Counting Squares

Calculate the area of the following shapes.


 = 1 cm²




Area = _____ cm²




Area = _____ cm²




Area = _____ cm²




Area = _____ cm²




Area = _____ cm²



Area = _____ cm²



Area = _____ cm²



Area = _____ cm²



Area = _____ cm²