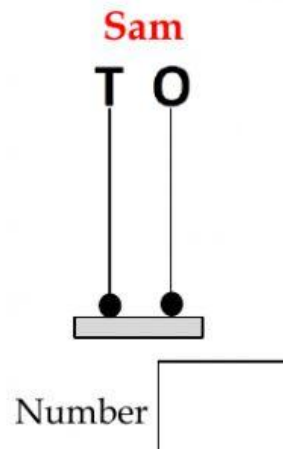
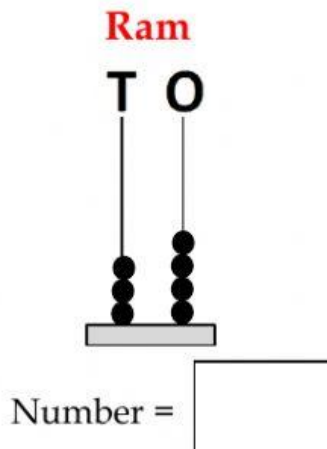


**I. Look at the abacus:**

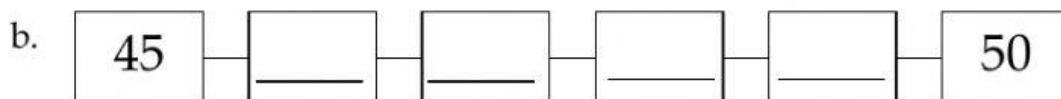
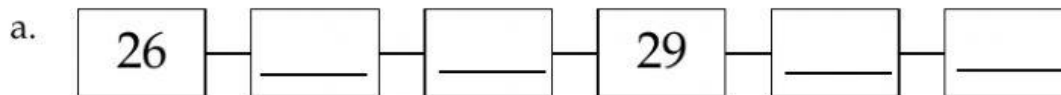
Write the number in the box and answer the following questions:



i) Who has more tens? \_\_\_\_\_ (Ram / Sam)

ii) Who has less ones? \_\_\_\_\_ (Ram / Sam)

**II. Count forward and fill in the boxes:**



**III. Count backward and fill in the boxes:**



IV. Do the following:



- a. Sita's door number is \_\_\_\_\_.
- b. What is the number of the house just before Sita's house? \_\_\_\_\_
- c. What is the number of the house just after Sita's house? \_\_\_\_\_