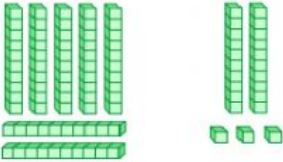
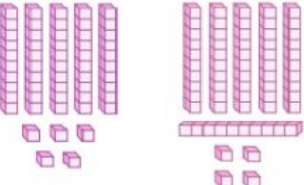
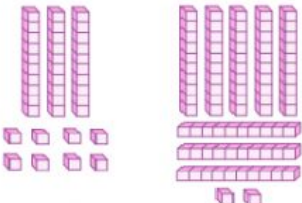
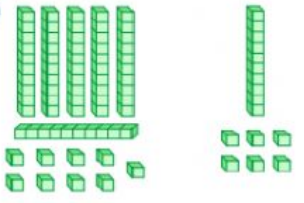
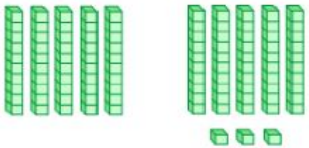
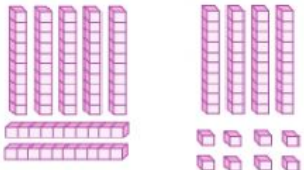
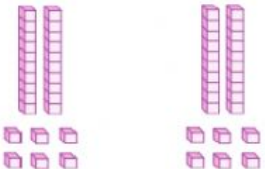
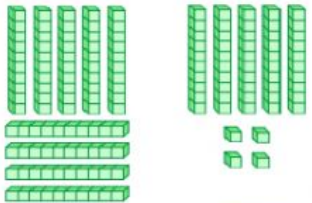


Identify the given number and find its sum.

Base Ten Blocks

Sheet 1

<p>1) </p> <p style="text-align: center;"> <input type="text"/> + <input type="text"/> = <input type="text"/> </p>	<p>2) </p> <p style="text-align: center;"> <input type="text"/> + <input type="text"/> = <input type="text"/> </p>
<p>3) </p> <p style="text-align: center;"> <input type="text"/> + <input type="text"/> = <input type="text"/> </p>	<p>4) </p> <p style="text-align: center;"> <input type="text"/> + <input type="text"/> = <input type="text"/> </p>
<p>5) </p> <p style="text-align: center;"> <input type="text"/> + <input type="text"/> = <input type="text"/> </p>	<p>6) </p> <p style="text-align: center;"> <input type="text"/> + <input type="text"/> = <input type="text"/> </p>
<p>7) </p> <p style="text-align: center;"> <input type="text"/> + <input type="text"/> = <input type="text"/> </p>	<p>8) </p> <p style="text-align: center;"> <input type="text"/> + <input type="text"/> = <input type="text"/> </p>

