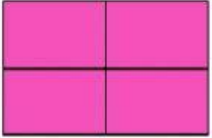

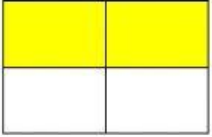
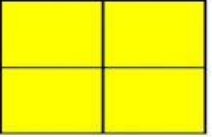




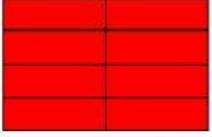
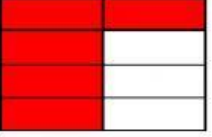
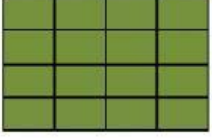

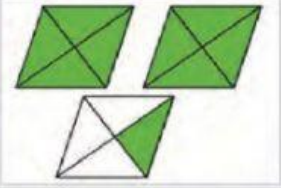
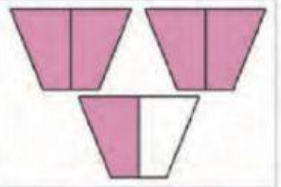

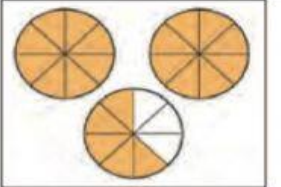
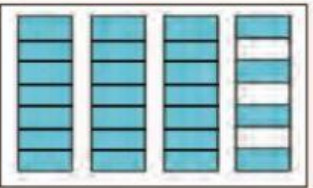
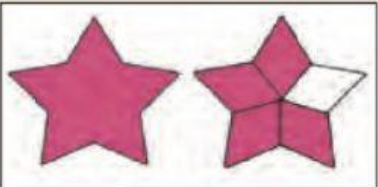



NAMA : \_\_\_\_\_ KELAS \_\_\_\_\_

Tulis nombor bercampur dan pecahan tak wajar

NOMBOR BARCAMPUR			PECAHAN TAK WAJAR
$\square \frac{\square}{\square}$			$\frac{\square}{\square}$
$\square \frac{\square}{\square}$			$\frac{\square}{\square}$
$\square \frac{\square}{\square}$			$\frac{\square}{\square}$
$\square \frac{\square}{\square}$			$\frac{\square}{\square}$
$\square \frac{\square}{\square}$			$\frac{\square}{\square}$
$\square \frac{\square}{\square}$			$\frac{\square}{\square}$

NOMBOR BARCAMPUR		PECAHAN TAK WAJAR
$\square \frac{\square}{\square}$		$\frac{\square}{\square}$
$\square \frac{\square}{\square}$		$\frac{\square}{\square}$
$\square \frac{\square}{\square}$		$\frac{\square}{\square}$
$\square \frac{\square}{\square}$		$\frac{\square}{\square}$
$\square \frac{\square}{\square}$		$\frac{\square}{\square}$
$\square \frac{\square}{\square}$		$\frac{\square}{\square}$
$\square \frac{\square}{\square}$		$\frac{\square}{\square}$