









Name _____

Date _____

COUNTING DIMES SHEET 2

Count the dimes. Work out the amounts in cents.

	= ____ ¢
	= ____ ¢
	= ____ ¢
	= ____ ¢
	= ____ ¢
	= ____ ¢
	= ____ ¢
	= ____ ¢

Fill in the correct amounts

_____ dimes makes 40¢

_____ dimes makes 20¢

_____ dimes makes 60¢

_____ dimes makes 50¢

_____ dimes makes 30¢

_____ dimes makes 80¢