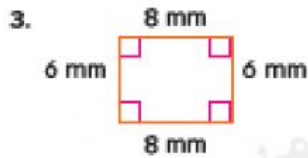
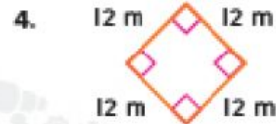


Independent Practice

Find each perimeter.



$P =$ _____



$P =$ _____

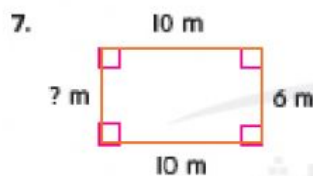


$P =$ _____

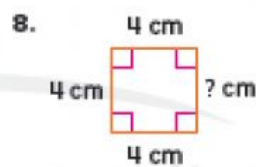


$P =$ _____

Algebra Find the unknown side length. Write an equation to find the perimeter.



The unknown side length is _____.



The unknown side length is _____.

Find the perimeter of each rectangle in units.



$P =$ _____



$P =$ _____