
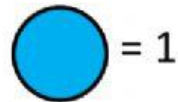


= 100

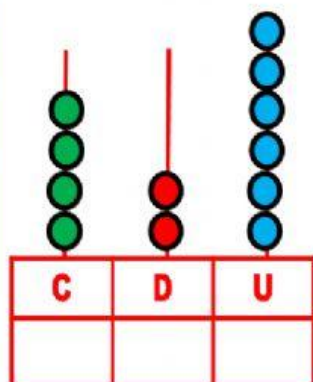


= 10

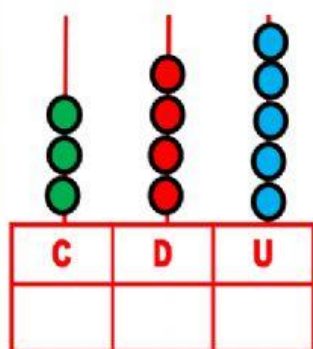


= 1

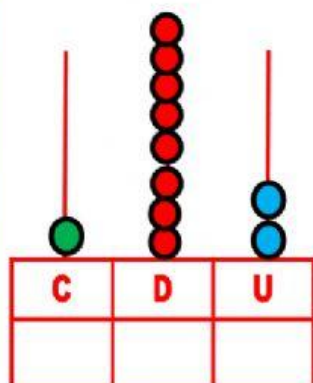
Completamos el tablero del ábaco y escribimos el número



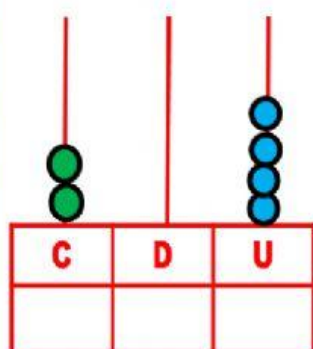
$$400 + 20 + 6 =$$



$$300 + 40 + 5 =$$

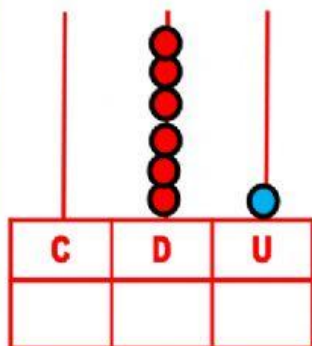


$$100 + 80 + 2 =$$

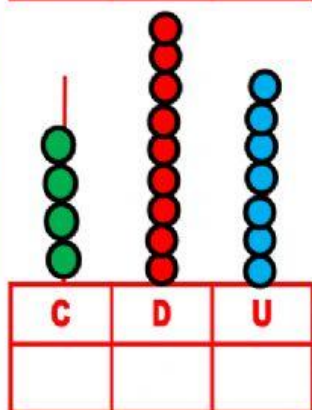


$$200 + 00 + 4 =$$

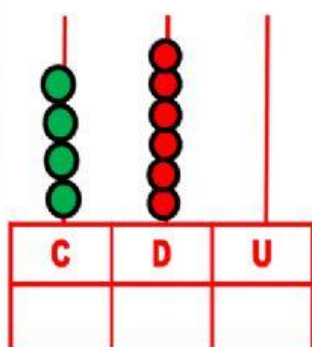




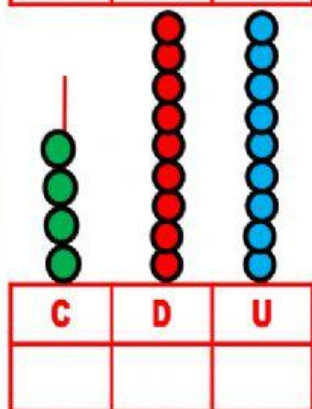
$$000 + 60 + 1 =$$



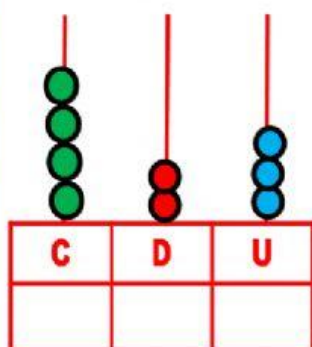
$$400 + 90 + 7 =$$



$$400 + 60 + 0 =$$



$$400 + 90 + 9 =$$



$$400 + 20 + 3 =$$

