

**PRACTICE: UNIDADES Y DECENAS**


**1. Cuenta los elementos y escoge la respuesta correcta.**



Hay \_\_\_\_\_ decenas y \_\_\_\_\_ unidades

Hay \_\_\_\_\_ decenas y \_\_\_\_\_ unidades

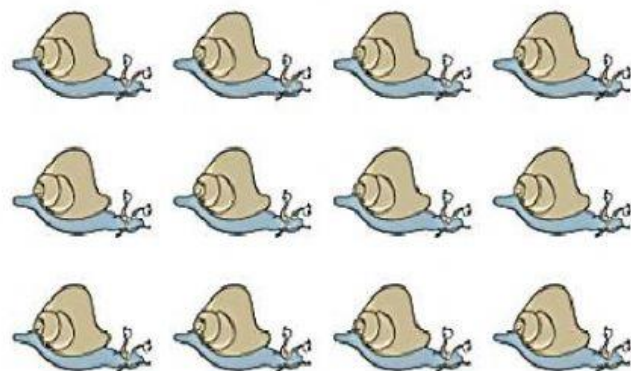
**2. Completa el tablero de valor posicional, arrastrando los números correctos.**



D	U
<input type="text"/>	<input type="text"/>

4

2

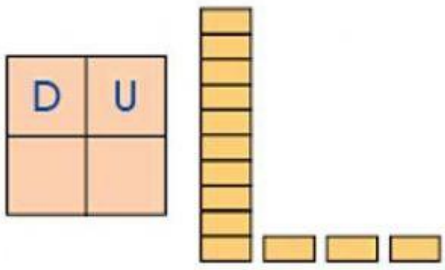
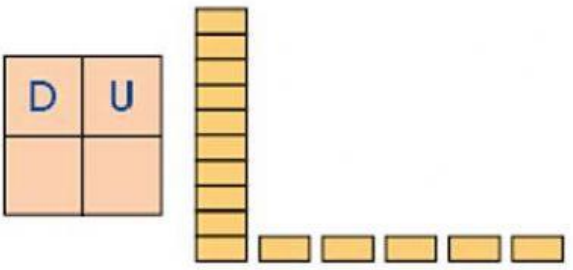
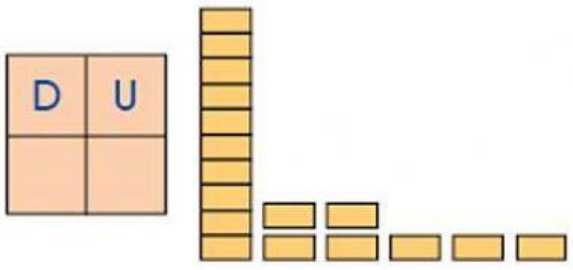
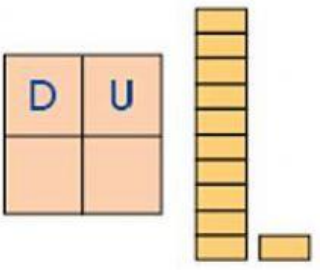



D	U
<input type="text"/>	<input type="text"/>

2

1

**3. Escribe los números adecuados en el tablero de valor posicional según el gráfico.**



**4. Selecciona las unidades y decenas según el número indicado.**

<div style="border: 1px solid black; border-radius: 50%; width: 40px; height: 40px; display: flex; align-items: center; justify-content: center; margin: 0 auto;"> <div style="border: 1px solid black; border-radius: 50%; width: 20px; height: 20px; display: flex; align-items: center; justify-content: center;">13</div> </div>	<table border="1" style="margin: 0 auto;"> <tr><td></td><td></td><td></td><td></td><td></td><td></td><td></td><td></td><td></td><td></td></tr> <tr><td></td><td></td><td></td><td></td><td></td><td></td><td></td><td></td><td></td><td></td></tr> </table>																					<table border="1" style="margin: 0 auto;"> <tr><td>D</td><td>U</td></tr> <tr><td></td><td></td></tr> </table>	D	U		
D	U																									
<div style="border: 1px solid black; border-radius: 50%; width: 40px; height: 40px; display: flex; align-items: center; justify-content: center;"> <div style="border: 1px solid black; border-radius: 50%; width: 20px; height: 20px; display: flex; align-items: center; justify-content: center;">15</div> </div>	<table border="1" style="margin: 0 auto;"> <tr><td></td><td></td><td></td><td></td><td></td><td></td><td></td><td></td><td></td><td></td></tr> <tr><td></td><td></td><td></td><td></td><td></td><td></td><td></td><td></td><td></td><td></td></tr> </table>																					<table border="1" style="margin: 0 auto;"> <tr><td>D</td><td>U</td></tr> <tr><td></td><td></td></tr> </table>	D	U		
D	U																									
<div style="border: 1px solid black; border-radius: 50%; width: 40px; height: 40px; display: flex; align-items: center; justify-content: center;"> <div style="border: 1px solid black; border-radius: 50%; width: 20px; height: 20px; display: flex; align-items: center; justify-content: center;">11</div> </div>	<table border="1" style="margin: 0 auto;"> <tr><td></td><td></td><td></td><td></td><td></td><td></td><td></td><td></td><td></td><td></td></tr> <tr><td></td><td></td><td></td><td></td><td></td><td></td><td></td><td></td><td></td><td></td></tr> </table>																					<table border="1" style="margin: 0 auto;"> <tr><td>D</td><td>U</td></tr> <tr><td></td><td></td></tr> </table>	D	U		
D	U																									