

approx. 15 minutes

# This is an example of Paper 3.

## Mathematics Paper 3

Stage 5

Name.....

No additional materials are allowed.

Calculators are **not** allowed.

Half a mark will be awarded for each question answered correctly.

The total number of marks is 10.

For Teacher's Use	
Total	

I don't give a box for the answer because  
I purposely only give an example and don't answer  
it.

V1



UNIVERSITY of CAMBRIDGE  
International Examinations

**LIVEWORKSHEETS**

Write your answers here.

**Time: 5 Seconds**

1		<input type="checkbox"/>
---	--	--------------------------

2		3030	<input type="checkbox"/>
---	--	------	--------------------------

3		<input type="checkbox"/>
---	--	--------------------------

4		<input type="checkbox"/>
---	--	--------------------------

5		%	$\frac{1}{2}$	<input type="checkbox"/>
---	--	---	---------------	--------------------------

Write your answers here.

**Time: 10 seconds**

6		170	<input type="checkbox"/>
---	--	-----	--------------------------

7		40	<input type="checkbox"/>
---	--	----	--------------------------

8		ml	<input type="checkbox"/>
---	--	----	--------------------------

9	<div> <div>4:30am</div> <div>6:30pm</div> <div>6:30am</div> <div>3:43pm</div> <div>4:30pm</div> </div>	<input type="checkbox"/>
---	--	--------------------------


10	1   2   3   4   5   6	<input type="checkbox"/>
----	-----------------------	--------------------------

11	2, 5, 11, 23, .....	<input type="checkbox"/>
----	---------------------	--------------------------

12		105	<input type="checkbox"/>
----	--	-----	--------------------------









13		cm	8 cm	<input type="checkbox"/>
----	--	----	------	--------------------------

14		2.5	<input type="checkbox"/>
----	--	-----	--------------------------

15		<input type="checkbox"/>
----	---	--------------------------

Write your answers here.


**Time: 15 seconds**

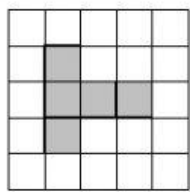
<b>16</b>	girls	   
	boys	  
	 = 4 people	

..... girls

<b>17</b>		6 6 5 7
		5 5 8

<b>18</b>		25
-----------	--	----

<b>19</b>		
	acute	equilateral
	obtuse	isosceles

<b>20</b>	

**BLANK PAGE**

---

Permission to reproduce items where third-party owned material protected by copyright is included has been sought and cleared where possible. Every reasonable effort has been made by the publisher (UCLES) to trace copyright holders, but if any items requiring clearance have unwittingly been included, the publisher will be pleased to make amends at the earliest possible opportunity.

University of Cambridge International Examinations is part of the Cambridge Assessment Group. Cambridge Assessment is the brand name of University of Cambridge Local Examinations Syndicate (UCLES), which is itself a department of the University of Cambridge.