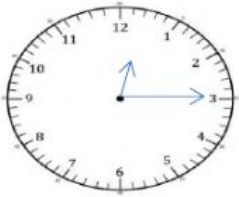




Name: \_\_\_\_\_

### Mathematics

Answer each question on the line provided.

No.	Item
1.	<p>Write the time shown on the clocks below.</p> <div></div> <p>Answer: Analog _____ (1mrk) Answer: Digital _____ (1mrk)</p> <div></div> <p>Answer: Analog _____ (1mk) Answer: Digital _____ (1mk)</p>
2	<p>Write the following times in analog format. (1 mrk each)</p> <p>1. 6:45 _____</p> <p>2. 3:00 _____</p> <p>3. 7:50 _____</p> <p>4. 9:15 _____</p> <p>5. 10:51 _____</p> <p>6. 9:09 _____</p>

3	<p>Convert the following time to the 24- hour notation. (1 mrk each)</p> <table border="1"> <thead> <tr> <th>Time</th> <th>24-hour notation</th> </tr> </thead> <tbody> <tr> <td>1. 10:00 am</td> <td></td> </tr> <tr> <td>2. 11:55 pm</td> <td></td> </tr> <tr> <td>3. 7:15 pm</td> <td></td> </tr> <tr> <td>4. 4:00 am</td> <td></td> </tr> <tr> <td>5. 1:05 pm</td> <td></td> </tr> </tbody> </table>	Time	24-hour notation	1. 10:00 am		2. 11:55 pm		3. 7:15 pm		4. 4:00 am		5. 1:05 pm							
Time	24-hour notation																		
1. 10:00 am																			
2. 11:55 pm																			
3. 7:15 pm																			
4. 4:00 am																			
5. 1:05 pm																			
4	<p>Re-write the 24- hour time in the digital and analog format. ( 1 mrk each)</p> <table border="1"> <thead> <tr> <th>Time (24- hour notation)</th> <th>Digital</th> <th>Analog</th> </tr> </thead> <tbody> <tr> <td>1. 1345 hrs</td> <td></td> <td></td> </tr> <tr> <td>2. 0430 hrs</td> <td></td> <td></td> </tr> <tr> <td>3. 1205 hrs</td> <td></td> <td></td> </tr> <tr> <td>4. 0845 hrs</td> <td></td> <td></td> </tr> <tr> <td>5. 1900 hrs</td> <td></td> <td></td> </tr> </tbody> </table>	Time (24- hour notation)	Digital	Analog	1. 1345 hrs			2. 0430 hrs			3. 1205 hrs			4. 0845 hrs			5. 1900 hrs		
Time (24- hour notation)	Digital	Analog																	
1. 1345 hrs																			
2. 0430 hrs																			
3. 1205 hrs																			
4. 0845 hrs																			
5. 1900 hrs																			
5	<p>Mr. Joe left home at 11:00 am to drive to Port of Spain. He arrived there at 1400 hrs. How long was his drive to Port of Spain?</p> <p>Answer _____ ( 3mrks)</p>																		
6	<p>Tom left Trinidad at 3:00 pm. He took the fast ferry and arrived in Tobago two hours later. Write the time Tom arrived in Tobago using the 24- hour notation?</p> <p>Answer : _____ (3mks)</p>																		

7	<p>Jack arrived at the zoo at 1:00 pm. The drive to the zoo took 3 hours. Write the time that Jack left home.</p> <p>Answer : _____ (3mks)</p>
8.	<p>Anna and Jamie arrived at the cinema at 1300. The movie began at 4:00 pm and ended two hours and a half later. Write the time that the movie ended using the 24 hour clock.</p> <p>Answer : _____ (3mks)</p>
9.	<p>The clocks show the time Jill left home and the time she arrived at the mall.</p> <div style="display: flex; justify-content: space-around; align-items: flex-end;"> <div style="text-align: center;">  <p>Time left home</p> </div> <div style="text-align: center;"> <div style="border: 1px solid black; padding: 5px; display: inline-block;">5:30 p.m</div> <p>Time arrived at mall</p> </div> </div> <p>How long did Jill take from home to the mall?</p> <p>Answer _____ (3mks)</p>