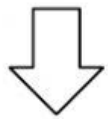
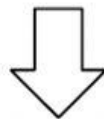
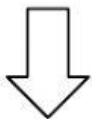


1. Complete the following concept map.

Locating Places On The Earth



Latitudes

Climatic zones

- The Arctic circle
- _____
- _____
- The Tropic of cancer
- _____

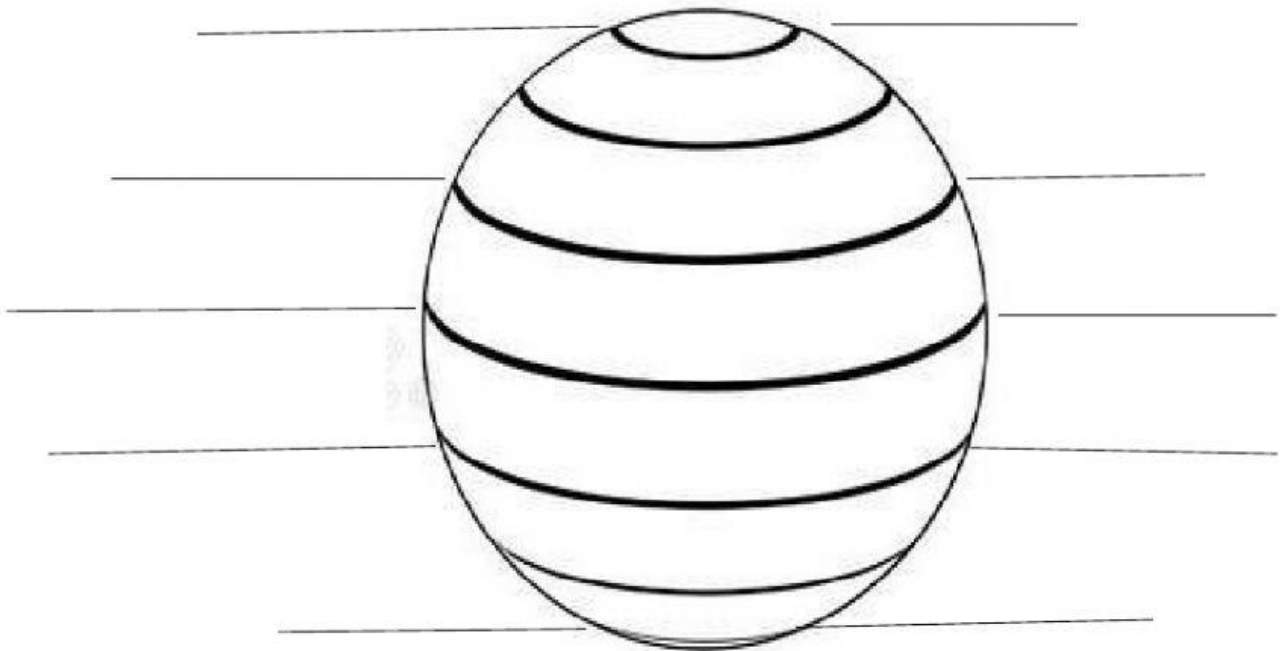
- The Torrid zone
- _____
- _____

- prime meridian
- _____
- _____
- _____
- Time zones

2. Label the following diagram

Lines of latitude

Degree-direction



3. Fill in the blanks.

- The longitudes run from _____ to _____.
- There are _____ important lines of latitude.
- The 0° latitude is known as _____.
- The earth spins on an imaginary line, known as the _____ of the Earth.
- The Equator runs through the continent of _____.