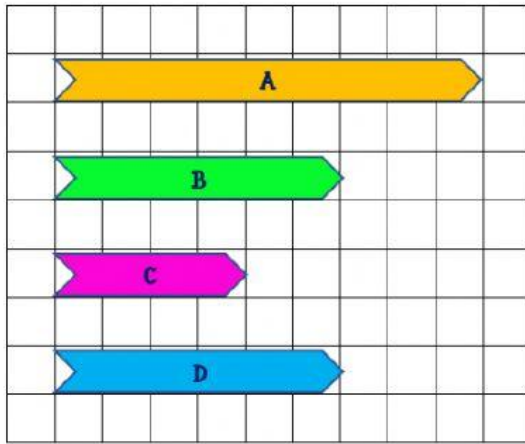



Read the instruction carefully to answer. Read the instruction carefully to answer. Read the instruction carefully to answer.

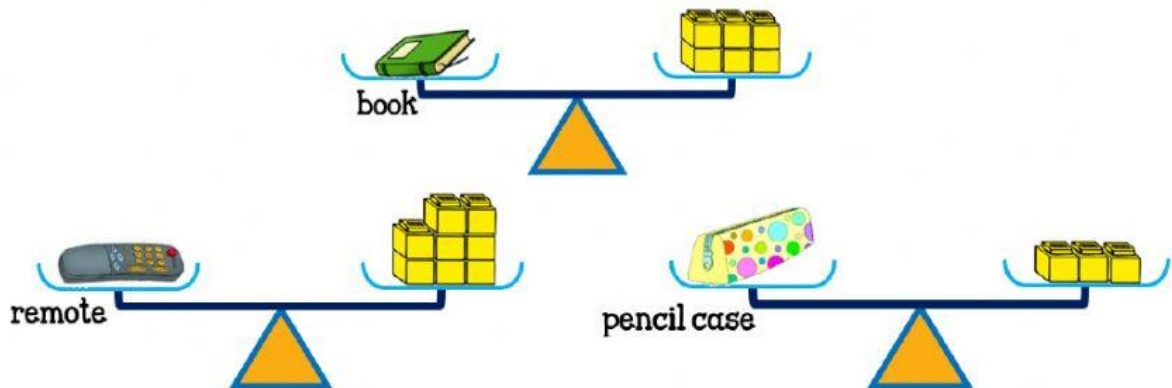
Section A: Measure

1) Look at the ribbons. Each stands for 1 unit. Choose to fill the blanks.



- a) Ribbon A is units long.
 b) Ribbon B is units long.
 c) Ribbon C is units long.
 d) Ribbon is **as long as** Ribbon
 e) Ribbon B is **shorter than** Ribbon
 f) Ribbon is **the longest**.

2) Look at each picture. Each  stands for 1 unit.



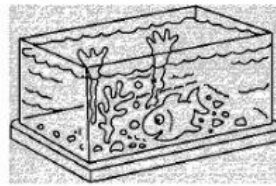


Choose the correct answers.

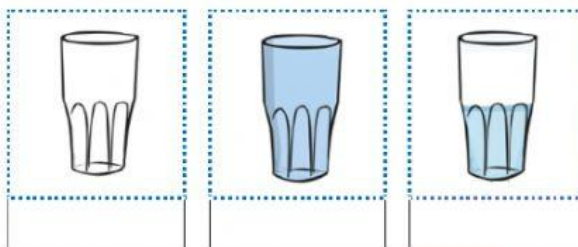
- a) The mass of the book is units.
 b) The mass of remote is units.
 c) The mass of pencil case is units.
 d) The book is **lighter than**
 e) The book is **heavier than**
 f) **The heaviest** object is
 g) **The lightest** object is

3) Drag to sort each object by capacity in the box.

hold more	hold less



Drag the correct word to describe each glass' capacity.



half full
full
empty

4) Here are some kids' activities. Choose 'morning', 'noon', 'afternoon' or 'night'.



- a) Jamila dusts her bed before sleeping. It is 9 o'clock at
- b) I must pray Dhuhr. It is 12 o'clock at
- c) My family members have breakfast at 7 in the
- d) As Muslim kid, I start to take a nap at 2 o'clock in the

5) Click choose the best answer.



It is 12 o'clock.

It is 8 o'clock.



It is 3 o'clock.

It is 5 o'clock.



It is 1 o'clock.

It is 6 o'clock.