

# Multiplicaciones


Completa las multiplicaciones

1)



$$4 \times \square = 8$$

2)



$$\square \times 3 = 9$$

3)




$$\square \times 5 = 15$$

4)



$$2 \times \square = 10$$

5)




$$4 \times \square = 16$$

6)




$$\square \times 3 = 12$$

7)



$$\square \times 5 = 25$$

8)



$$4 \times \square = 20$$