



worksheetspack

# Movement

## Grade 3

Name:

Date:

Fill in the boxes.



mall



school



tree



Emma



Jack



cafe



home



museum

- (a) If Jack makes a quarter turn clockwise, he will face the: \_\_\_\_\_
- (b) If Jack makes a whole turn anti-clockwise, he will face the: \_\_\_\_\_
- (c) If Emma makes a half turn clockwise, she will face the: \_\_\_\_\_
- (d) If Jack makes a half turn clockwise, he will face the: \_\_\_\_\_
- (e) If Emma makes a quarter turn anti-clockwise, she will face the: \_\_\_\_\_



worksheetspack


# Movement

## Grade 3

Name:

Date:

Fill in the boxes.



Jack is facing the bank.  
He wants to follow the path.

2

3

quarter

forward

clockwise

anti-clockwise

- (a) Jack moves 4 squares \_\_\_\_\_ to go to the bank.
- (b) Then, he makes a \_\_\_\_\_ turn clockwise and moves \_\_\_\_\_ squares forward to go to the museum.
- (c) Then, he makes a quarter turn \_\_\_\_\_ and moves 3 squares forward to go to the cafe.
- (d) Then, he makes a quarter turn \_\_\_\_\_ and moves \_\_\_\_\_ squares forward to go to the home.





worksheetspack









# Movement

Grade 3

Name:

Date:

Tick the correct box.

6						
5						
4						
3						
2						
1						
	A	B	C	D	E	F

(a) At position C4

☐☐☐

(b) At position E6

☐☐☐

(c) At position D3

☐☐☐

(d) At position B5

☐☐☐



worksheetspack

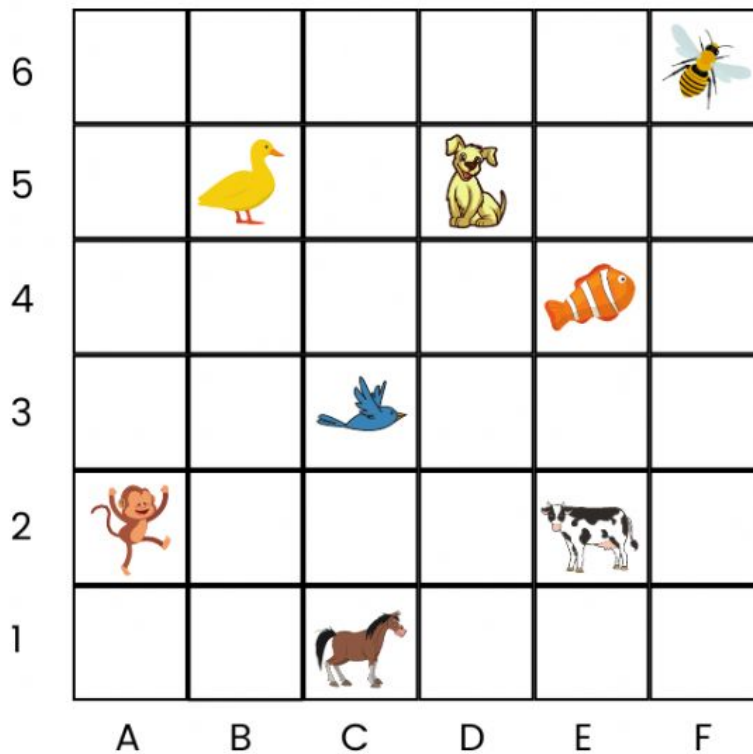
# Movement

Grade 3

Name:

Date:

Fill in the boxes.



- (a) The dog is at \_\_\_\_\_.
- (b) The bee is at \_\_\_\_\_.
- (c) The cow is at \_\_\_\_\_.
- (d) The fish is at \_\_\_\_\_.
- (e) The \_\_\_\_\_ is at C3.
- (f) The \_\_\_\_\_ is at A2.
- (g) The \_\_\_\_\_ is at B5.
- (h) The \_\_\_\_\_ is at C1.