

MATH QUIZ AREA AND PERIMETER

Solve the following operations.

$$\begin{array}{r} 4,495 \\ + 3,768 \\ \hline \end{array}$$

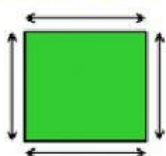
$$\begin{array}{r} 7,842 \\ - 4,763 \\ \hline \end{array}$$

$$\begin{array}{r} 847 \\ \times 5 \\ \hline \end{array}$$

Drag the word to the right definition

AREA

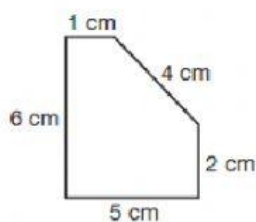
PERIMETER



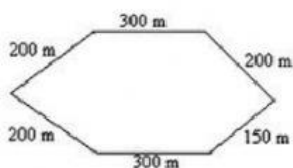
The distance around the edge of a shape

The amount of space inside a shape

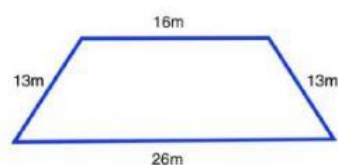
Find the perimeter of the following polygons. Don't forget to write the unit.



P= _____

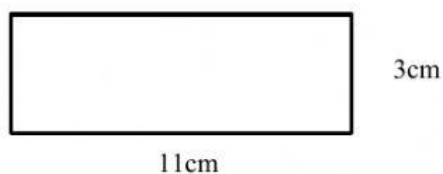


P= _____



P= _____

Find the area of the following quadrilaterals. Don't forget to write the unit.



A= _____



A= _____