



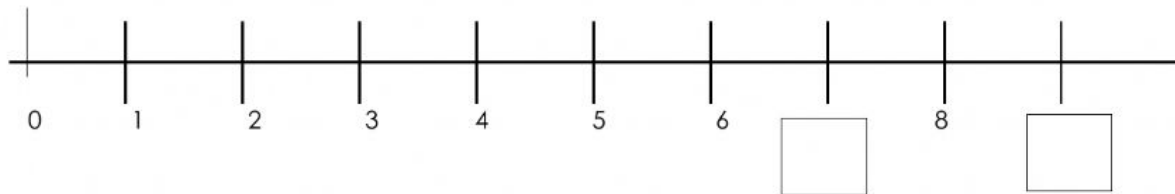
## Number line Assessment

Score:

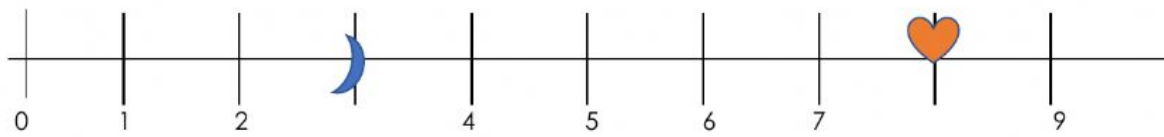
\_\_\_\_/25

Name: _____	Date: May _____ 2021	Class: 1 <sup>st</sup> grade _____
-------------	----------------------	------------------------------------

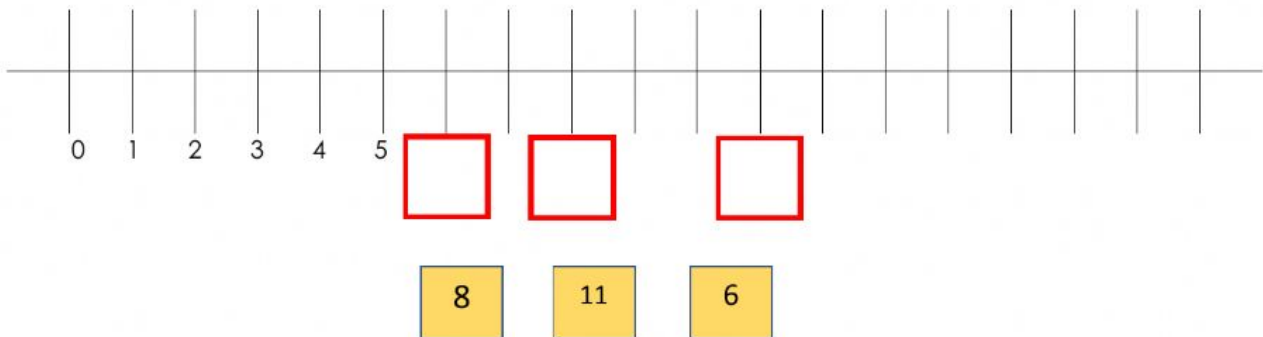
1) Look at the number line, what numbers are missing? Write them in the spaces. (\_\_\_\_/2)



2) What numbers do the  and the  represent in the number line? (\_\_\_ / 2)



3) Write number **6**, **8** and **11** in the number line. (\_\_\_ / 3)



4) Look at the number lines and complete with the corresponding numbers. (\_\_\_\_ / 18)

