

LO: To estimate and compare capacity and round numbers on measuring jugs.

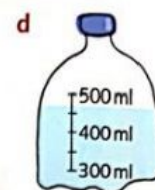
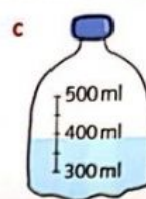
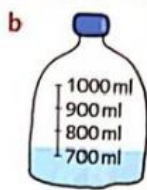
Estimating and rounding capacity

Estimate and compare capacity and round numbers on measuring jugs



Challenges
1,2

1 Estimate the amount of liquid in each bottle to the nearest 100 ml.





a.

b.

c.

d.

2 Round the amount of liquid in each container to the nearest litre.



a.

b.

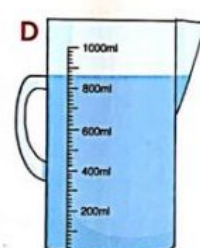
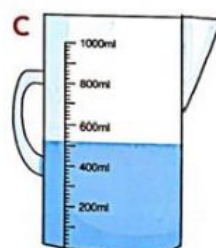
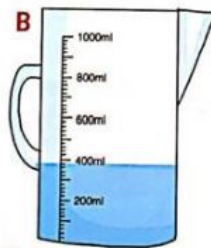
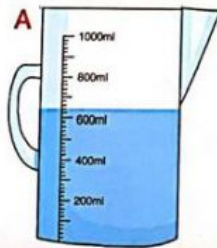
c.

d.

Challenge
2

For each of the four measuring jugs write the amount of liquid:

a in millilitres



Challenge
2

For each of the four measuring jugs write the amount of liquid:

b rounded to the nearest 100 ml

