

VOLUME

1. Here is a cuboid.

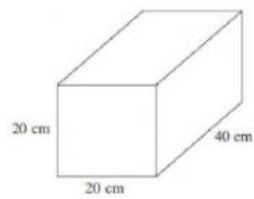


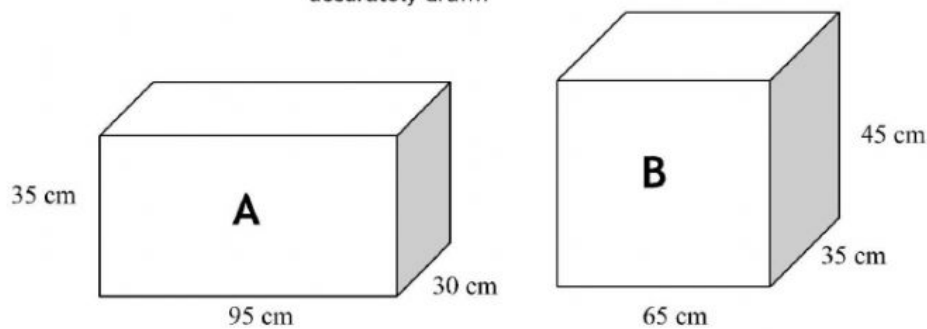
Diagram NOT
accurately drawn

Work out the volume of the cuboid.

cm³

- *2. The diagram shows two fish tanks, each in the shape of a cuboid.

Diagram NOT
accurately drawn



Finley fills both fish tanks with water.

Which fish tank holds the most water?
You must show all your calculations.

Tank A = **cm³**

Tank B = **cm³**



VOLUME

3. The diagram shows a prism.

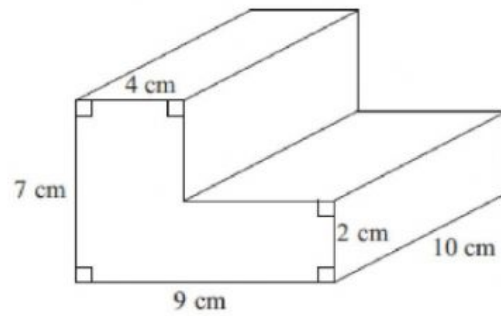


Diagram **NOT**
accurately drawn

Work out the volume of the prism.

.....cm³

VOLUME

4.

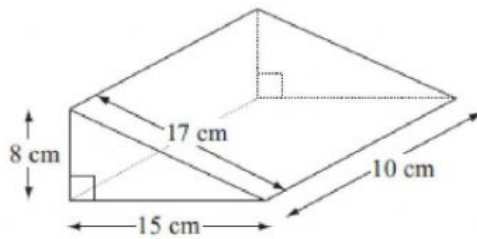


Diagram NOT
accurately drawn

Work out the volume of the triangular prism.

 cm^3

5.

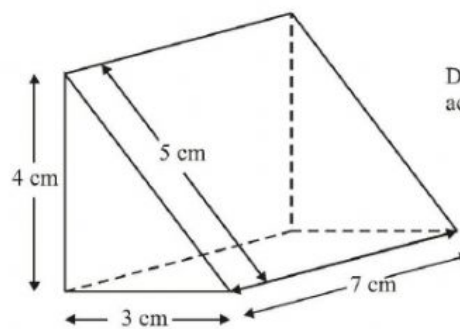


Diagram NOT
accurately drawn

Calculate the volume of the triangular prism.

 cm^3