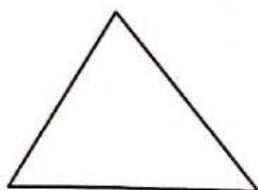


Worksheet 1 Types of Triangles


1. Match each shape to its name. Each shape can only be matched to one name.



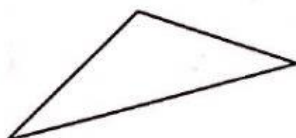
Equilateral triangle



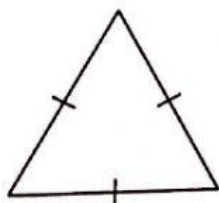
Right-angled triangle



Isosceles triangle

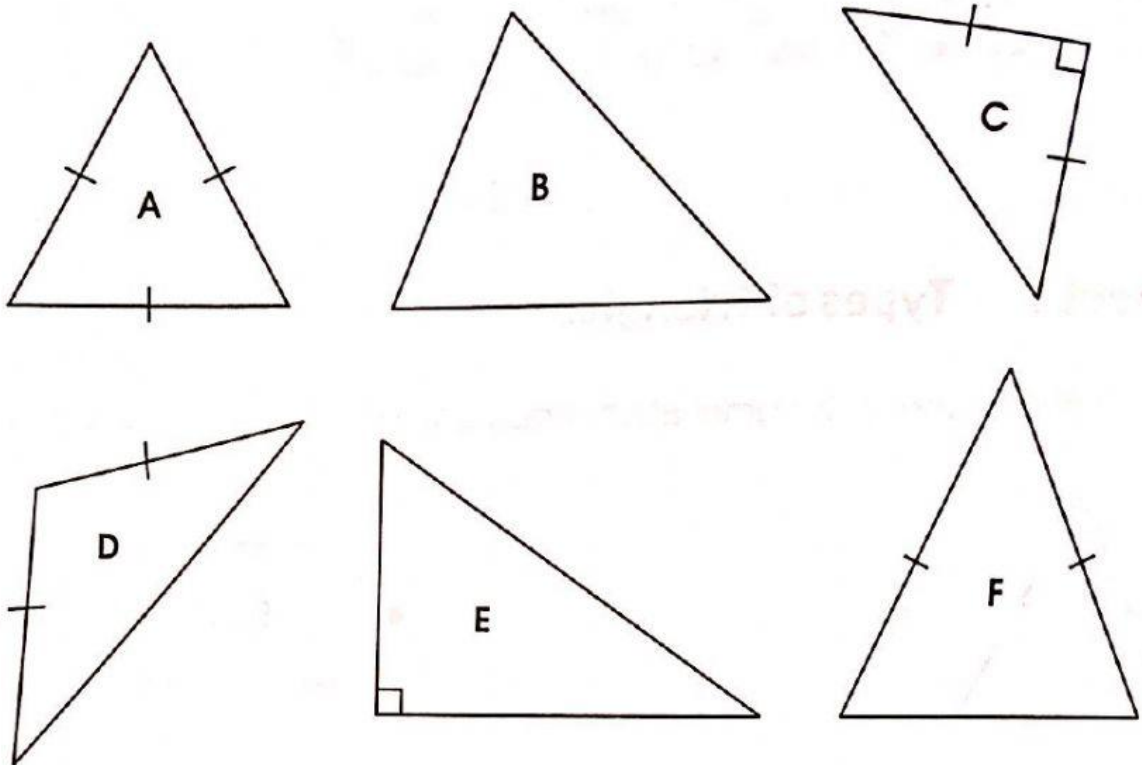


Obtuse-angled triangle



Acute-angled triangle

2. Fill in the blanks.



- (a) Triangle is an equilateral triangle.
- (b) Triangles and are right-angled triangles.
- (c) Triangles , and are isosceles triangles.
- (d) Triangle C has equal sides.
- (e) All the sides of triangle A are .