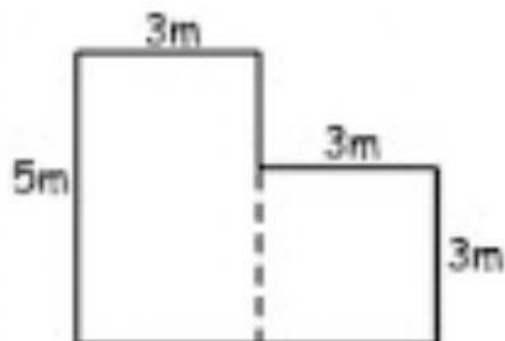


Area

[Print](#)

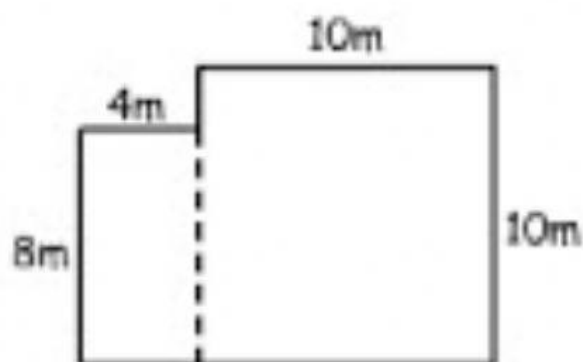
Calculate the total area of these irregular shapes.



$$A 1 = \underline{\hspace{1cm}} \times \underline{\hspace{1cm}}$$

$$A 2 = \underline{\hspace{1cm}} \times \underline{\hspace{1cm}}$$

$$\text{Total Area} = \underline{\hspace{2cm}}$$

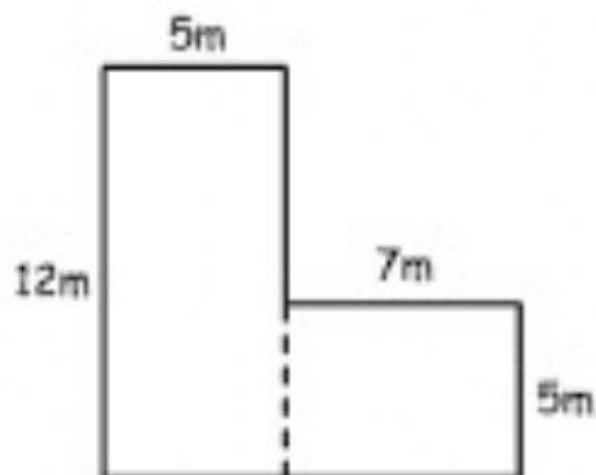


$$A 1 = \underline{\hspace{1cm}} \times \underline{\hspace{1cm}}$$

$$A 2 = \underline{\hspace{1cm}} \times \underline{\hspace{1cm}}$$

$$\text{Total Area} = \underline{\hspace{2cm}}$$

How many square metres of carpet are laid in this house?



$$A 1 = \underline{\hspace{1cm}} \times \underline{\hspace{1cm}}$$

$$A 2 = \underline{\hspace{1cm}} \times \underline{\hspace{1cm}}$$

$$\text{Total Area} = \underline{\hspace{2cm}}$$