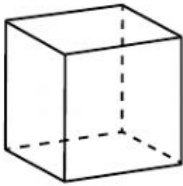


Name: _____ Score /10

Stage 1 Maths: 3D Space

1 Match the shapes to their correct name:

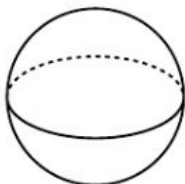
/5



Cone




Sphere



Cube



Cylinder



Rectangular
prism

Stage 1 Maths: 3D Space

1 Match the shapes to their correct name:

/5



Cylinder



Cone



Cube



Triangular
prism



Sphere

