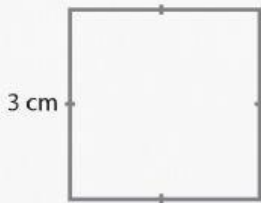


## Luas Persegi dan Persegi Panjang

Nama: \_\_\_\_\_ Kelas: \_\_\_\_\_

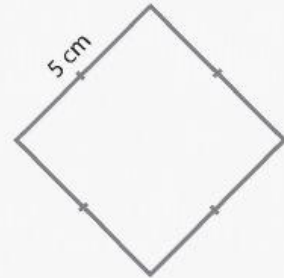
Tentukan luas dari persegi dan persegi panjang berikut!



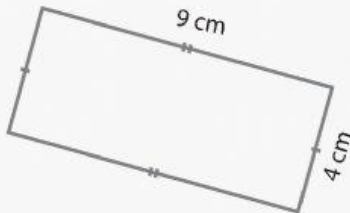
Luas: \_\_\_\_\_  $\text{cm}^2$



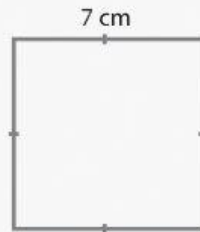
Luas: \_\_\_\_\_  $\text{cm}^2$



Luas: \_\_\_\_\_  $\text{cm}^2$



Luas: \_\_\_\_\_  $\text{cm}^2$



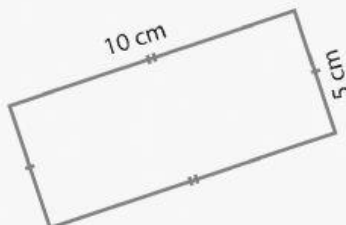
Luas: \_\_\_\_\_  $\text{cm}^2$



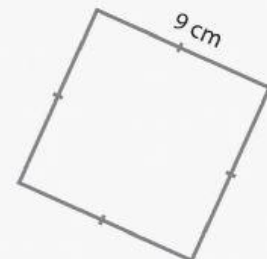
Luas: \_\_\_\_\_  $\text{cm}^2$



Luas: \_\_\_\_\_  $\text{cm}^2$



Luas: \_\_\_\_\_  $\text{cm}^2$



Luas: \_\_\_\_\_  $\text{cm}^2$