


☐ Bilal met d'autres pièces de monnaie dans son sac.
Combien d'argent a-t-il maintenant?



27 ¢

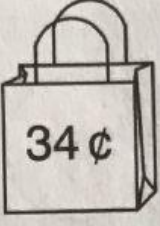
10 ¢

10 ¢

5 ¢

10 ¢

1 ¢

$$\begin{array}{r} 27 \text{ ¢} \\ + \square \text{ ¢} \\ \hline \square \text{ ¢} \end{array}$$


34 ¢

25 ¢

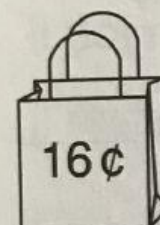
25 ¢

10 ¢

1 ¢

1 ¢

1 ¢

$$\begin{array}{r} 34 \text{ ¢} \\ + \square \text{ ¢} \\ \hline \square \text{ ¢} \end{array}$$


16 ¢

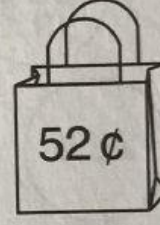
25 ¢

1 ¢

25 ¢

25 ¢

5 ¢

$$\begin{array}{r} 16 \text{ ¢} \\ + \square \text{ ¢} \\ \hline \square \text{ ¢} \end{array}$$


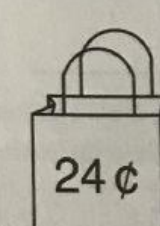
52 ¢

10 ¢

10 ¢

10 ¢

10 ¢

$$\begin{array}{r} 52 \text{ ¢} \\ + \square \text{ ¢} \\ \hline \square \text{ ¢} \end{array}$$


24 ¢

25 ¢

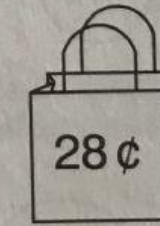
25 ¢

10 ¢

1 ¢

10 ¢

5 ¢

$$\begin{array}{r} 24 \text{ ¢} \\ + \square \text{ ¢} \\ \hline \square \text{ ¢} \end{array}$$


28 ¢

25 ¢

10 ¢

10 ¢

10 ¢

1 ¢

5 ¢

5 ¢

1 ¢

$$\begin{array}{r} 28 \text{ ¢} \\ + \square \text{ ¢} \\ \hline \square \text{ ¢} \end{array}$$