

Fractions and Mixed Numbers

Choose the best term from the list.

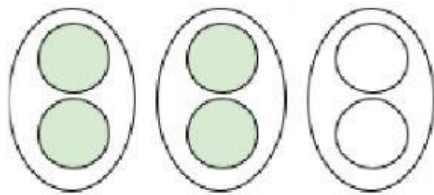
equivalent fraction
fraction

mixed number
simplest form

1. A _____ is made up of a whole number and a fraction.
2. Two or more fractions that name the same amount are
_____.
3. A _____ is a number that names part of a group.

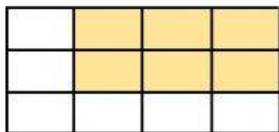
Write the fraction or mixed number for each picture.

4.



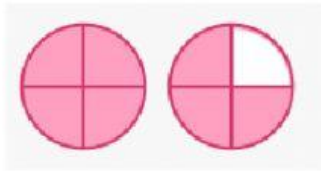
500
100

5. 2



500
100

6.



500
100

Write each fraction in its simplest form.

7.

$$\frac{2}{12}$$

8.

$$\frac{15}{20}$$

9.

$$\frac{6}{9}$$

Compare. Write $<$, $>$ or $=$.

10.

$$\frac{2}{3}$$

$$\frac{2}{12}$$

11.

$$\frac{1}{3}$$

$$\frac{1}{4}$$

12.

$$\frac{9}{12}$$

$$\frac{9}{12}$$