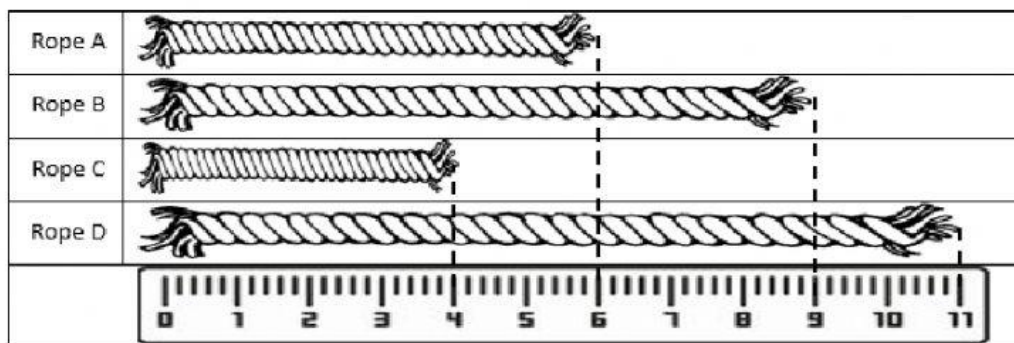


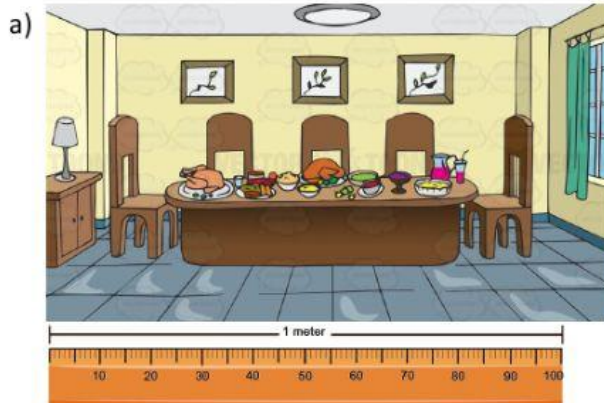
Bismillahirrahmanirrahim

Answer the questions below.

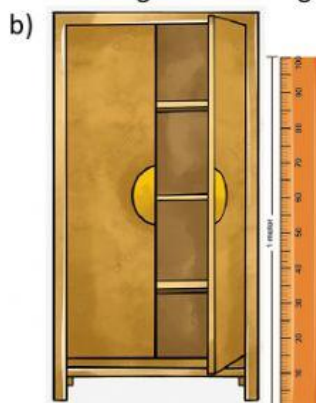
Look at the picture below to answer number 1 and 2.



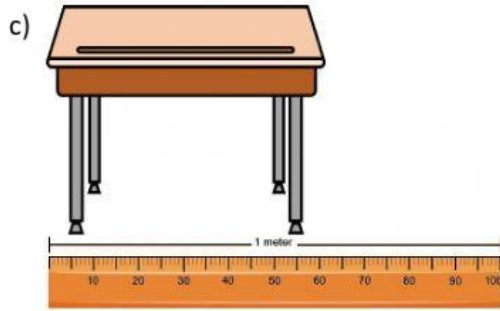
- The length of the rope A is ____ cm.
 - The length of the rope B is ____ cm.
 - The length of the rope C is ____ cm.
 - The length of the rope D is ____ cm.
- The longest item is the rope ____.
 - The shortest item is the rope ____.
 - The rope A is ____ cm shorter than rope D.
 - The rope B is ____ cm longer than rope C.
- Complete the sentences with the correct word based on the pictures.



The length of a dining room is ____ than 1 metre.



The height of a cupboard is ____ than 1 metre.



The length of a desk is _____ than 1 metre.

4. What are the missing numbers?



3 groups of

$4 + 4 + 4 =$

$3 \times 4 =$



5 groups of

$2 + 2 + 2 + 2 + 2 =$

$5 \times 2 =$

5. Complete the missing numbers.



4 groups of 7

+ + + =
 sevens =

6. Write the multiplication sentences.



\times =



\times =

7. Complete.

a. $5 \times 10 =$

b. $7 \times 2 =$

c. $5 \times 9 =$

d. $10 \times 6 =$

8. Type the missing numbers.

a) Alya recites A Qur'an 2 times in a day.

How many times does Alya recite Al Quran in five days?

\times =

She recites Al Qur'an times in 5 days.

b)



There are 10 motorbikes in parking lot. Each motorbike has 2 wheels.

How many motorbike wheels in parking lot altogether?

\times =

There are wheels altogether.

Alhamdulillahillahi 'aalamiin