


WHAT IS THE ANGLE?


Identify each of these angles by matching each one to the correct type.



Less than right angle

Right angle

Greater than right angle



Less than right angle

Right angle

Greater than right angle



Less than right angle

Right angle

Greater than right angle



Less than right angle

Right angle

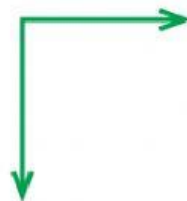
Greater than right angle



Less than right angle

Right angle


Greater than right angle



Less than right angle

Right angle

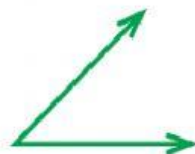
Greater than right angle



Less than right angle

Right angle

Greater than right angle



Less than right angle

Right angle

Greater than right angle



Less than right angle

Right angle

Greater than right angle