





Standard IV Smith Mathematics

Tally Chart

A **tally chart** is a **simple** way of recording and counting frequencies. Each occurrence is shown by a **tally** mark and every fifth **tally** is drawn diagonally to make a “gate” of five. The **tallies** can then be counted to give the frequency.

TALLY CHART AND FREQUENCY TABLE

Laila is a café owner. She sells burger, pizza, hot dog and fried chicken. The tally chart shows how many of each kind were sold during the weekends. Use the information from the tally chart to answer the questions. Write the frequency of the items sold in the table given. One has been done for you.

Food Items		Tally Marks	Frequency
	Burger		16
	Pizza		
	Fried Chicken		
	Hot Dog		

1. Which food item was sold the least (very less)?

2. How many Burgers and Fried chicken were sold altogether?

3. How many more Pizzas were sold as compared to the Hot Dog?