


# ATIVIDADE INTERATIVA DE MATEMÁTICA

## FIGURAS GEOMÉTRICAS PLANAS

1) ADIVINHAÇÃO DAS FIGURAS GEOMÉTRICAS. ESCREVA AS RESPOSTAS:


**QUEM SOU EU?**

⇒ **TENHO QUATRO LADOS IGUAIS.  
SOU SEU AMIGO.  
PODE-SE FAZER VÁRIOS DESENHOS  
COMIGO.  
SOU O**



**QUADRADO**

⇒ **SOU LEGAL PARA BRINCAR.  
TENHO TRÊS LADOS.  
VOCÊ QUER ME DESENHAR?  
SOU O**




**TRIÂNGULO**

⇒ **SOU REDONDO COMO BOLA.  
NÃO ME CONFUNDA COM MOLA  
SOU O**

⇒ **SOU ASSIM:  
DOIS LADOS PEQUENOS,  
E DOIS MAIORES.  
FAÇA UM X EM MIM:**



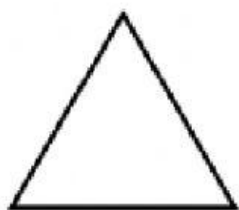
**RETÂNGULO**




**CÍRCULO**

2) LIGUE OS OBJETOS ÀS SUAS FORMAS CORRESPONDENTES:


1.



2.



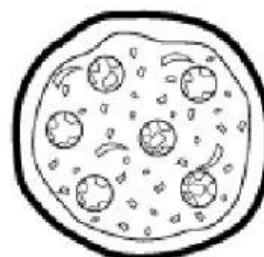
3.



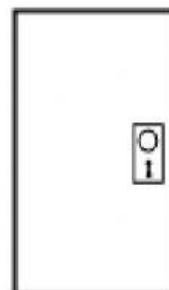
4.



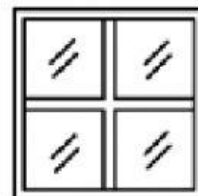
a.



b.





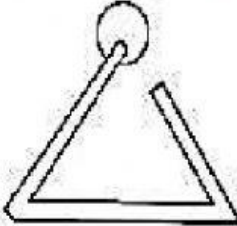


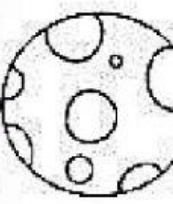
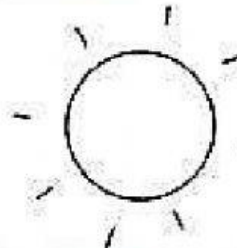
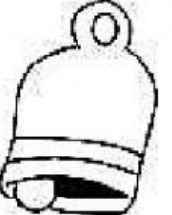
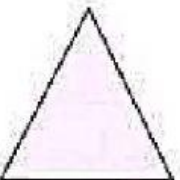
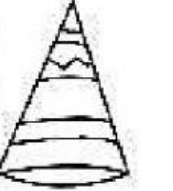



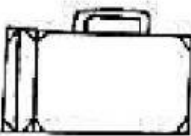

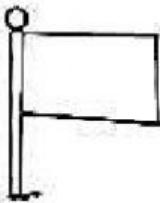
c.



d.



3) VEJA OS DESENHOS E AS FORMAS DELES! MARQUE AQUELES CUJAS FORMAS SÃO SEMELHANTES ÀS DO PRIMEIRO QUADRO:

 <b>QUADRADO</b>			
 <b>CÍRCULO</b>			
 <b>TRIÂNGULO</b>			
 <b>RETÂNGULO</b>			

DESENHE E ESCREVA O NOME DAS QUATRO FIGURAS GEOMÉTRICAS DESTA ATIVIDADE EM SEU CADERNO.