



Lesson 9-4 Practice


Subjective Short Answer

Circle the shapes described.

1. shapes with 3 sides




2. shapes that are curved

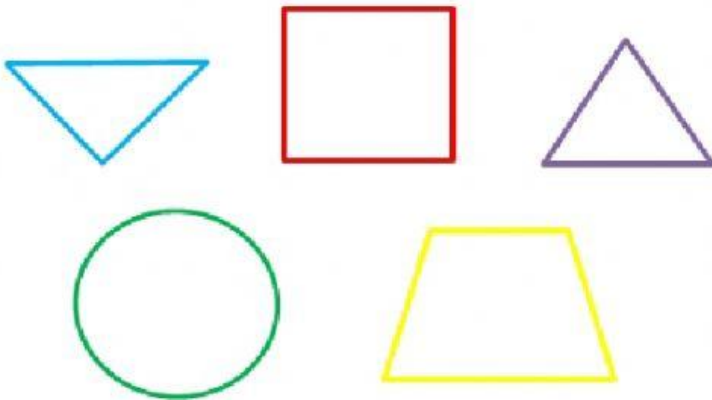


Lesson 9-4 Practice

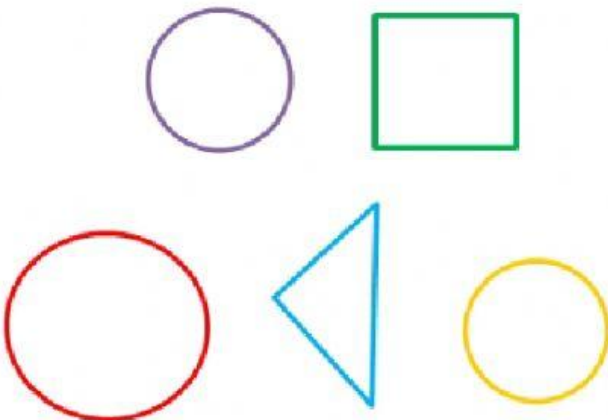
3. shapes with 4 vertices



4. shapes with 3 sides and 3 vertices




5. shapes with 0 sides




Lesson 9-4 Practice

6. shapes with 4 sides the same length



7. shapes with more than 3 vertices

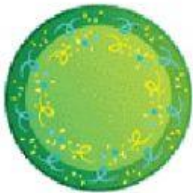


8. shapes with straight sides



Lesson 9-4 Practice

9. shapes with less than 4 sides



Essay

10. Maggie sees these signs on the way to soccer practice. How many of the signs have 4 vertices?



_____ signs