




Telling Time Trick-or-Treat Style




Henry went trick-or-treating. He got a lot of candy! He is telling his friends about his fun time. Can you help him with the **timeline**? Determine what time he got each piece of candy based on the information given. Write your answer in the space provided.


Timeline: events in the order that they happened



Henry got a lollipop 10 minutes later.



3 minutes later at the next house, Henry got some candy corn.



It took Henry 11 more minutes before he got a gum drop.




Henry got a mini chocolate donut 6 minutes later.



What's this?!
An apple?
Henry got the apple 13 minutes later.



9 minutes later, Henry got some gum.



After waiting for his dad, Henry finally got another piece of candy 23 minutes later.