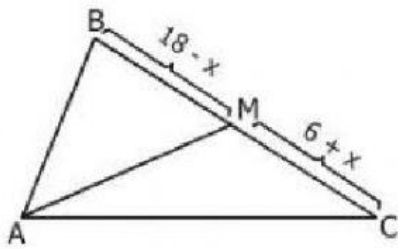
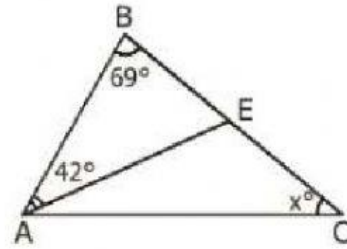


Tus respuestas deben ser números y sin grados

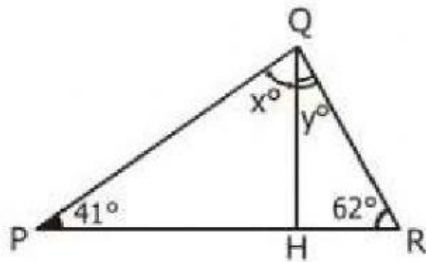
1. Hallar el valor de "x"
Si: AM es mediana



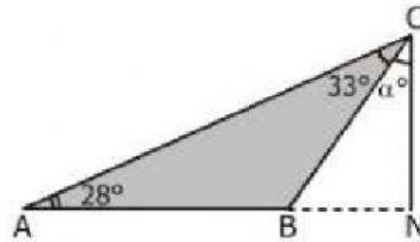
2. Hallar el valor de "x"
Si: AE es bisectriz



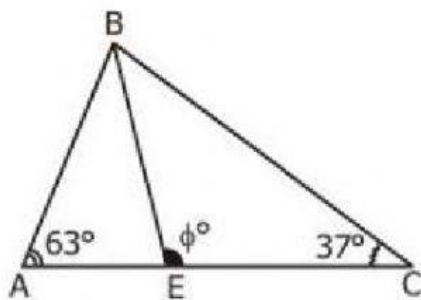
3. Hallar el valor de "x - y"
Si: QH es altura.



4. Hallar el valor de "α"
Si: CN es altura.



5. Hallar "φ" Si: BE es bisectriz



Miss Betty