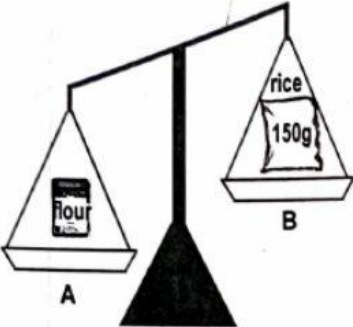
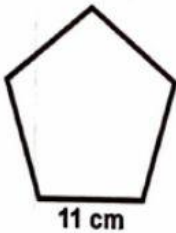



NO.	ITEMS	DO NOT WRITE IN THIS COLUMN
13.	<p>The scale shown below is imbalanced, 1.25 kg needs to be added to tray B to make it balanced. What is the weight of the flour?</p>  <p>_____</p>	1
14.	<p>Calculate the perimeter of the regular pentagon shown.</p>  <p>_____</p>	1
15.	<p>Grant purchased the video game shown and wants to resell it to make a profit of \$35.00. Calculate the price he will have to sell the video game for.</p>  <p>_____</p>	1